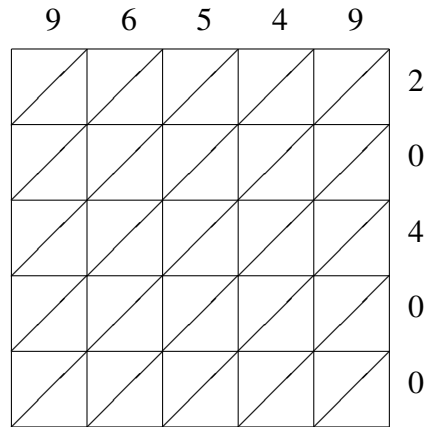
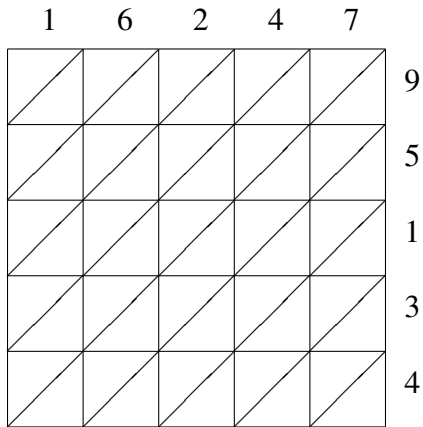


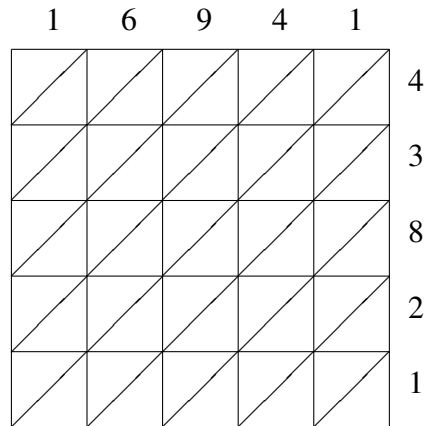
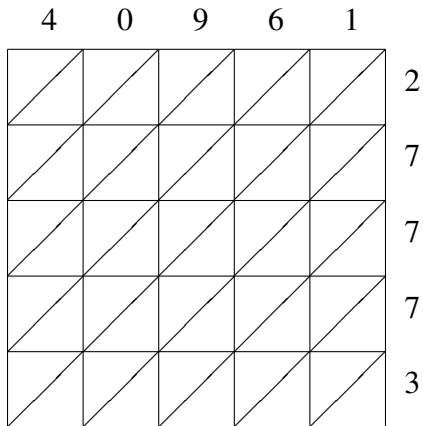
# Lattice Multiplication (F)

Use lattice multiplication to find each product.



$16247 \times 95134 = \underline{\hspace{10em}}$

$96549 \times 20400 = \underline{\hspace{10em}}$

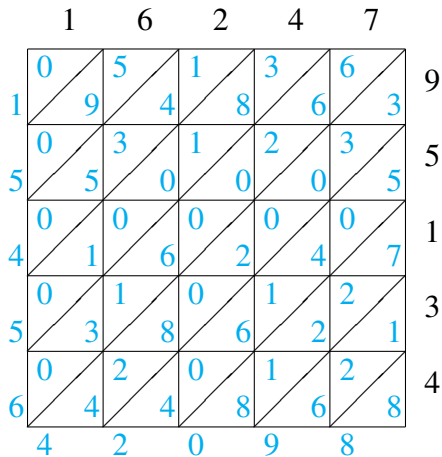


$40961 \times 27773 = \underline{\hspace{10em}}$

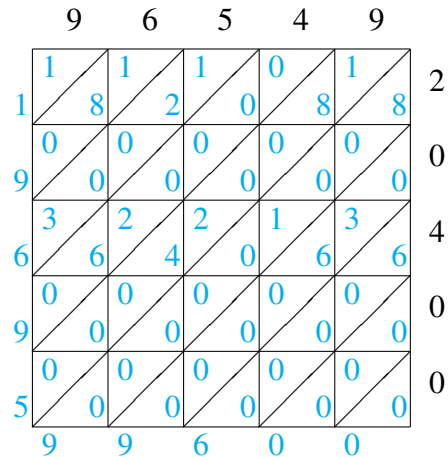
$16941 \times 43821 = \underline{\hspace{10em}}$

# Lattice Multiplication (F) Answers

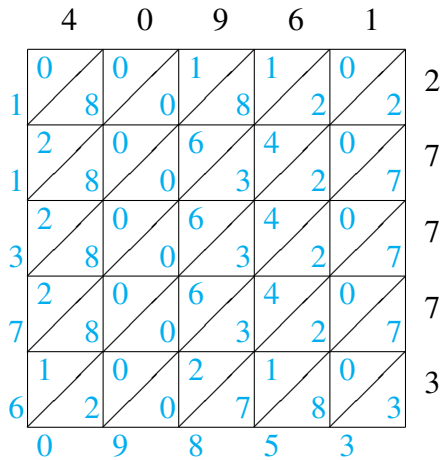
Use lattice multiplication to find each product.



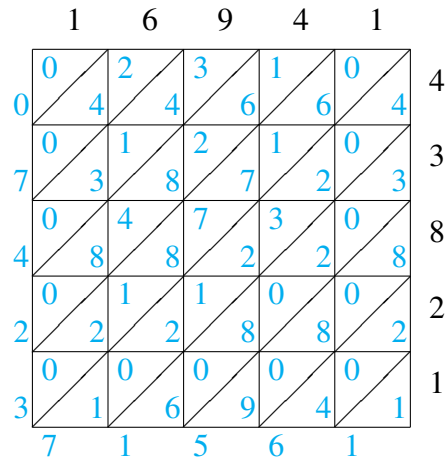
$$16247 \times 95134 = 1,545,642,098$$



$$96549 \times 20400 = 1,969,599,600$$



$$40961 \times 27773 = 1,137,609,853$$



$$16941 \times 43821 = 742,371,561$$