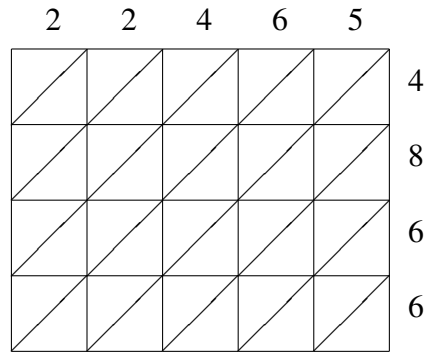
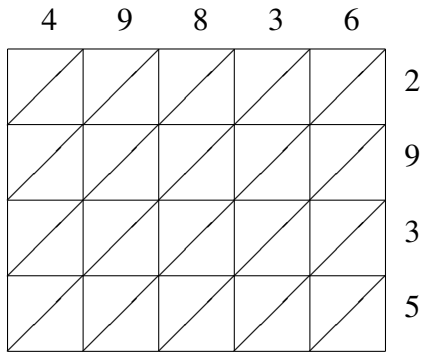


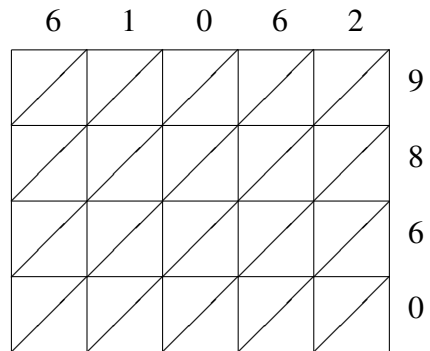
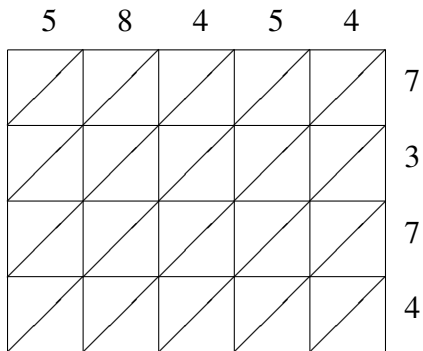
Lattice Multiplication (B)

Use lattice multiplication to find each product.



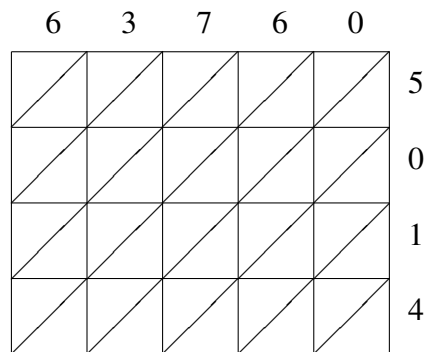
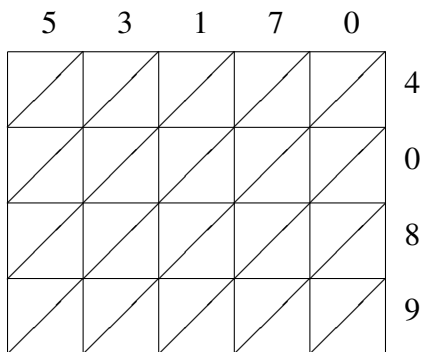
$49836 \times 2935 = \underline{\hspace{2cm}}$

$22465 \times 4866 = \underline{\hspace{2cm}}$



$58454 \times 7374 = \underline{\hspace{2cm}}$

$61062 \times 9860 = \underline{\hspace{2cm}}$



$53170 \times 4089 = \underline{\hspace{2cm}}$

$63760 \times 5014 = \underline{\hspace{2cm}}$