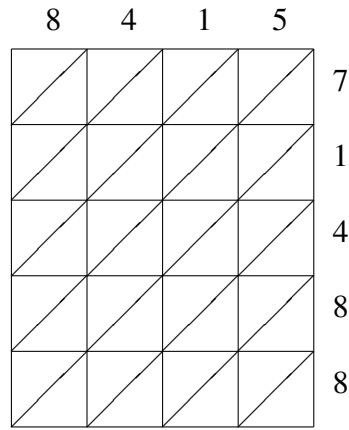
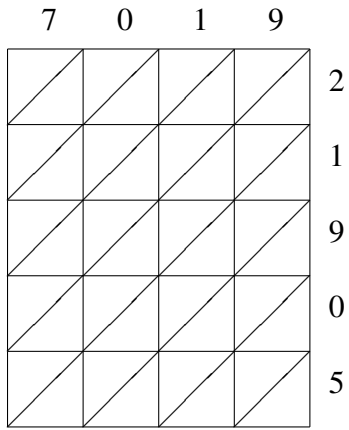


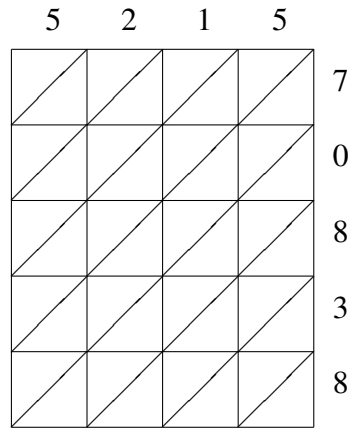
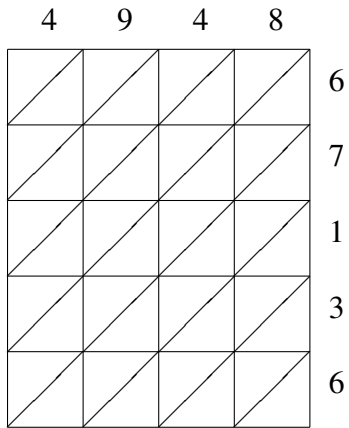
# Lattice Multiplication (J)

Use lattice multiplication to find each product.



$7019 \times 21905 = \underline{\hspace{2cm}}$

$8415 \times 71488 = \underline{\hspace{2cm}}$



$4948 \times 67136 = \underline{\hspace{2cm}}$

$5215 \times 70838 = \underline{\hspace{2cm}}$