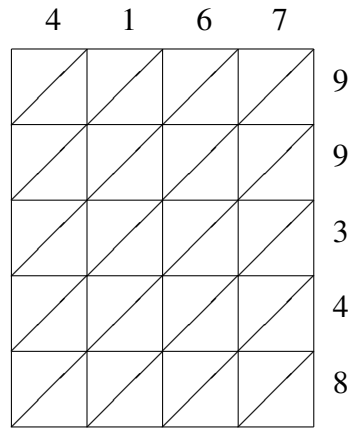
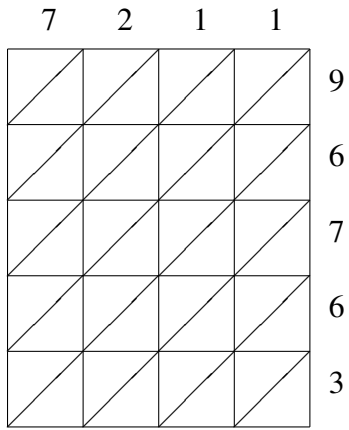


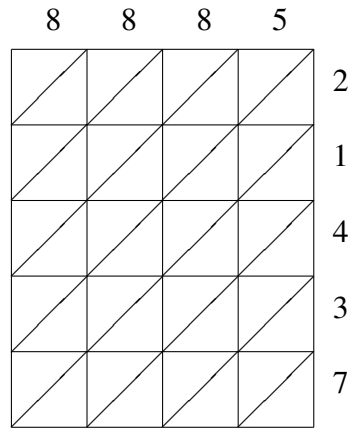
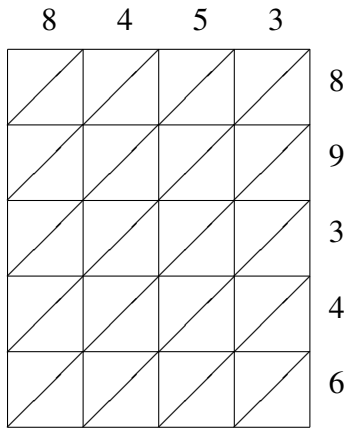
# Lattice Multiplication (C)

Use lattice multiplication to find each product.



$7211 \times 96763 = \underline{\hspace{2cm}}$

$4167 \times 99348 = \underline{\hspace{2cm}}$



$8453 \times 89346 = \underline{\hspace{2cm}}$

$8885 \times 21437 = \underline{\hspace{2cm}}$