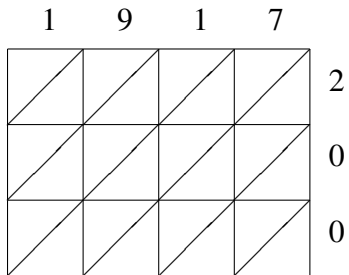
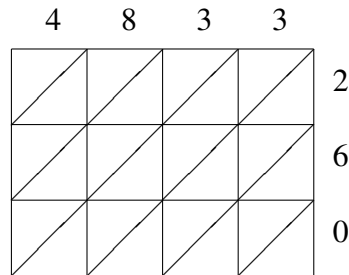


Lattice Multiplication (H)

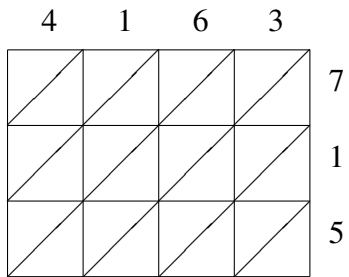
Use lattice multiplication to find each product.



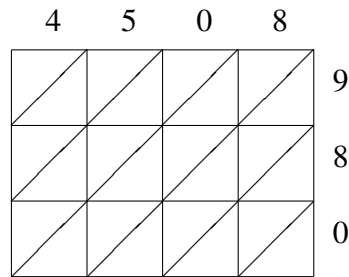
$1917 \times 200 = \underline{\hspace{2cm}}$



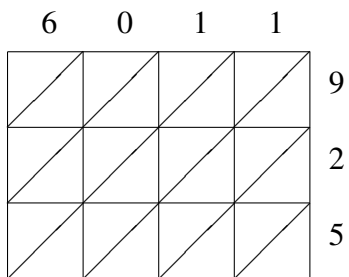
$4833 \times 260 = \underline{\hspace{2cm}}$



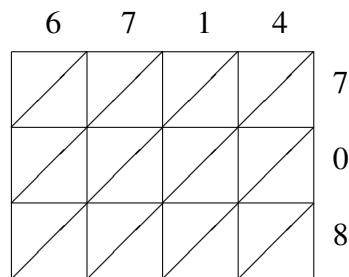
$4163 \times 715 = \underline{\hspace{2cm}}$



$4508 \times 980 = \underline{\hspace{2cm}}$



$6011 \times 925 = \underline{\hspace{2cm}}$



$6714 \times 708 = \underline{\hspace{2cm}}$