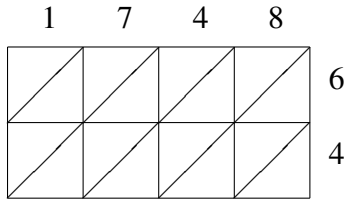
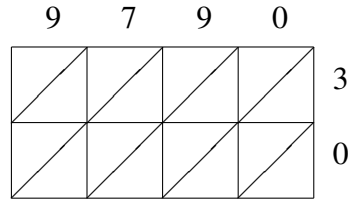


# Lattice Multiplication (B)

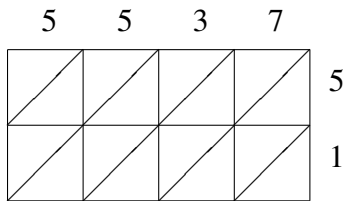
Use lattice multiplication to find each product.



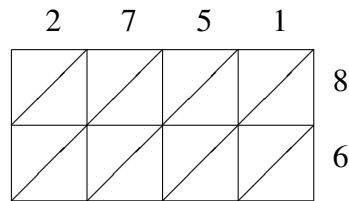
$1748 \times 64 = \underline{\hspace{2cm}}$



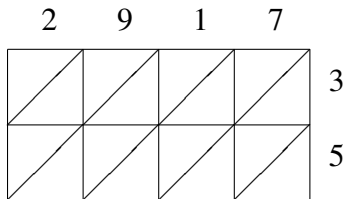
$9790 \times 30 = \underline{\hspace{2cm}}$



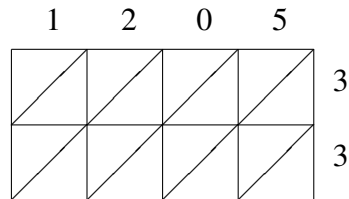
$5537 \times 51 = \underline{\hspace{2cm}}$



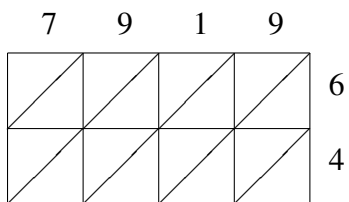
$2751 \times 86 = \underline{\hspace{2cm}}$



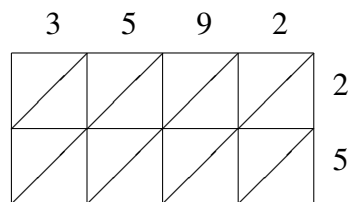
$2917 \times 35 = \underline{\hspace{2cm}}$



$1205 \times 33 = \underline{\hspace{2cm}}$



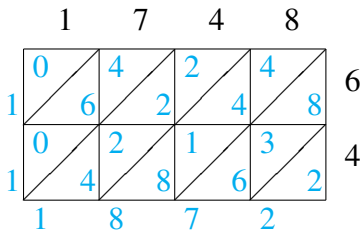
$7919 \times 64 = \underline{\hspace{2cm}}$



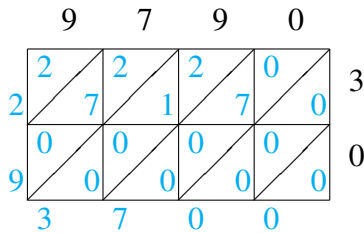
$3592 \times 25 = \underline{\hspace{2cm}}$

# Lattice Multiplication (B) Answers

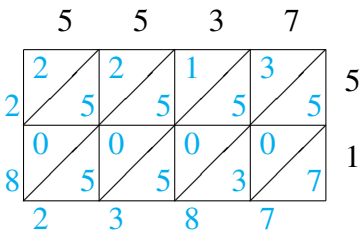
Use lattice multiplication to find each product.



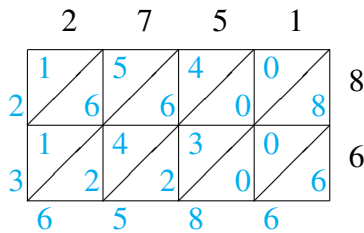
$$1748 \times 64 = 111,872$$



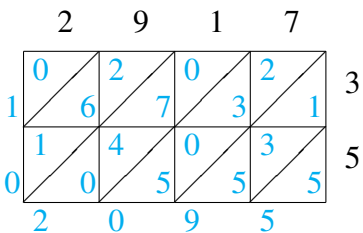
$$9790 \times 30 = 293,700$$



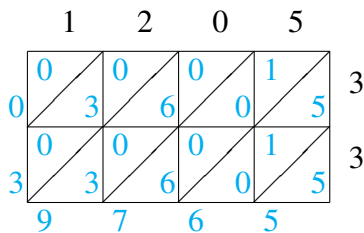
$$5537 \times 51 = 282,387$$



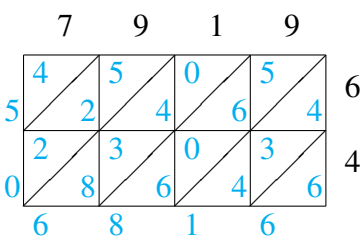
$$2751 \times 86 = 236,586$$



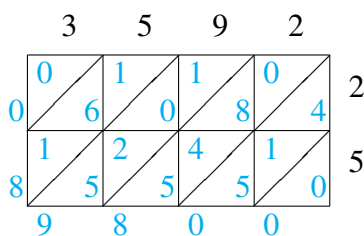
$$2917 \times 35 = 102,095$$



$$1205 \times 33 = 39,765$$



$$7919 \times 64 = 506,816$$



$$3592 \times 25 = 89,800$$