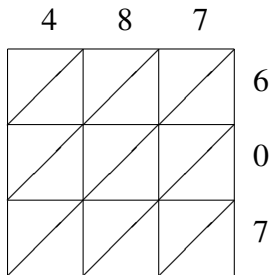
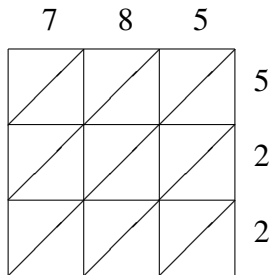


# Lattice Multiplication (H)

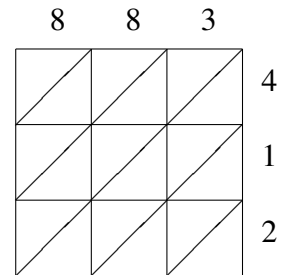
Use lattice multiplication to find each product.



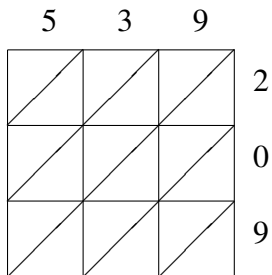
$487 \times 607 = \underline{\hspace{2cm}}$



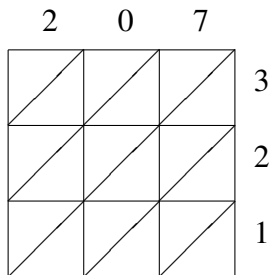
$785 \times 522 = \underline{\hspace{2cm}}$



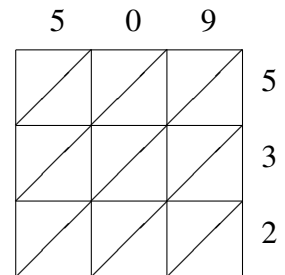
$883 \times 412 = \underline{\hspace{2cm}}$



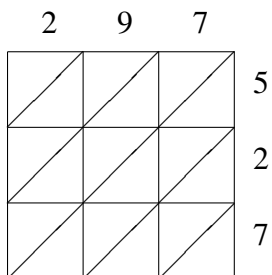
$539 \times 209 = \underline{\hspace{2cm}}$



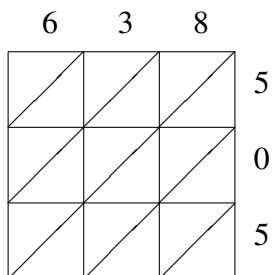
$207 \times 321 = \underline{\hspace{2cm}}$



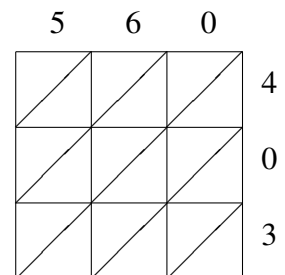
$509 \times 532 = \underline{\hspace{2cm}}$



$297 \times 527 = \underline{\hspace{2cm}}$



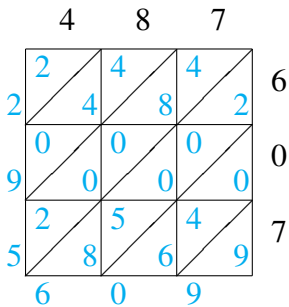
$638 \times 505 = \underline{\hspace{2cm}}$



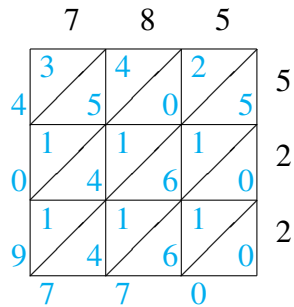
$560 \times 403 = \underline{\hspace{2cm}}$

# Lattice Multiplication (H) Answers

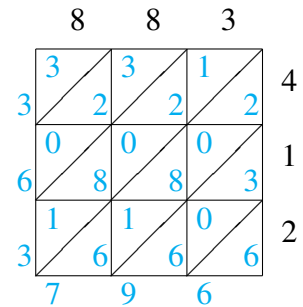
Use lattice multiplication to find each product.



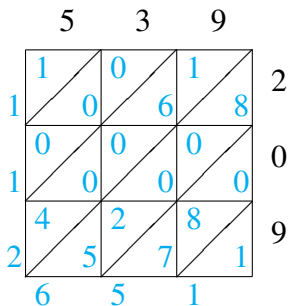
$$487 \times 607 = 295,609$$



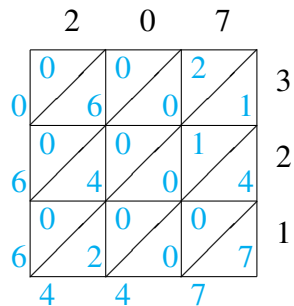
$$785 \times 522 = 409,770$$



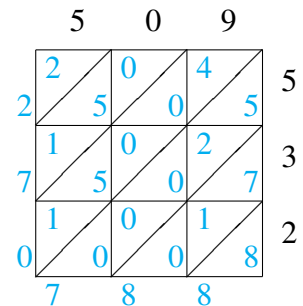
$$883 \times 412 = 363,796$$



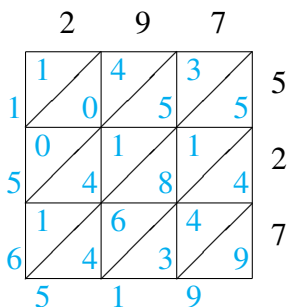
$$539 \times 209 = 112,651$$



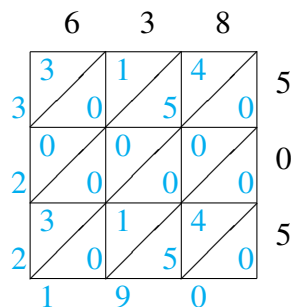
$$207 \times 321 = 66,447$$



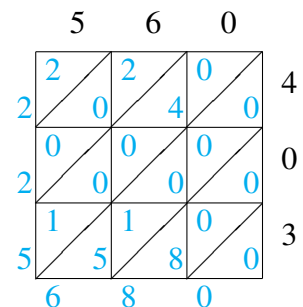
$$509 \times 532 = 270,788$$



$$297 \times 527 = 156,519$$



$$638 \times 505 = 322,190$$



$$560 \times 403 = 225,680$$