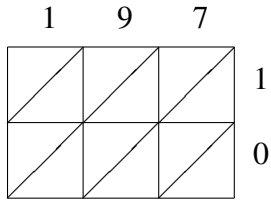
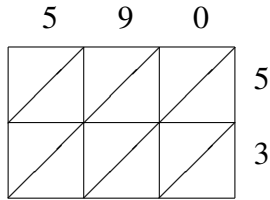


# Lattice Multiplication (J)

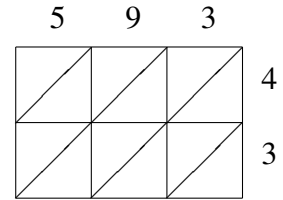
Use lattice multiplication to find each product.



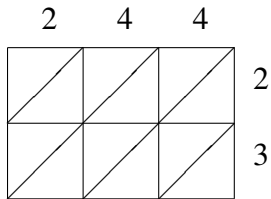
$197 \times 10 = \underline{\hspace{2cm}}$



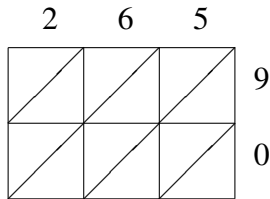
$590 \times 53 = \underline{\hspace{2cm}}$



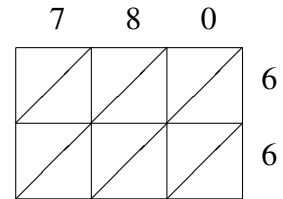
$593 \times 43 = \underline{\hspace{2cm}}$



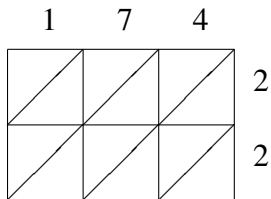
$244 \times 23 = \underline{\hspace{2cm}}$



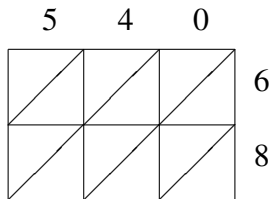
$265 \times 90 = \underline{\hspace{2cm}}$



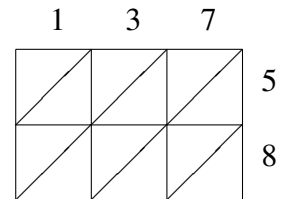
$780 \times 66 = \underline{\hspace{2cm}}$



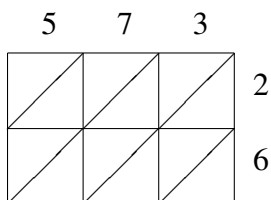
$174 \times 22 = \underline{\hspace{2cm}}$



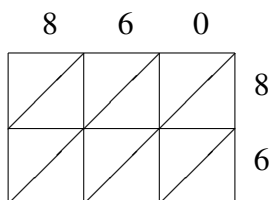
$540 \times 68 = \underline{\hspace{2cm}}$



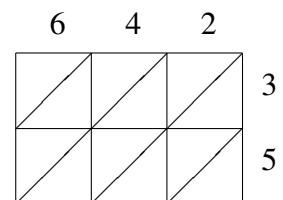
$137 \times 58 = \underline{\hspace{2cm}}$



$573 \times 26 = \underline{\hspace{2cm}}$



$860 \times 86 = \underline{\hspace{2cm}}$



$642 \times 35 = \underline{\hspace{2cm}}$