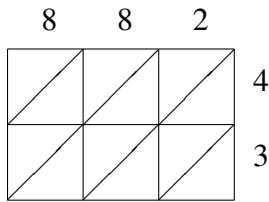
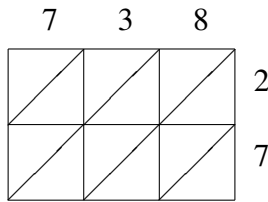


# Lattice Multiplication (F)

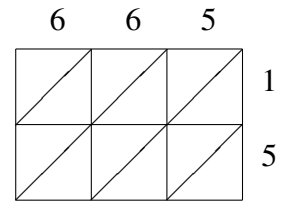
Use lattice multiplication to find each product.



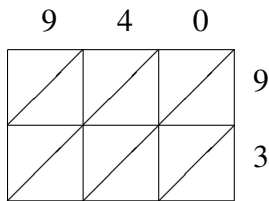
$882 \times 43 = \underline{\hspace{2cm}}$



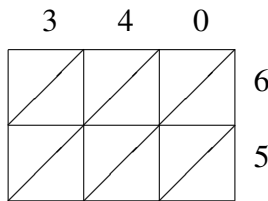
$738 \times 27 = \underline{\hspace{2cm}}$



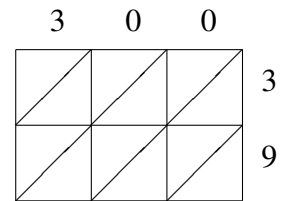
$665 \times 15 = \underline{\hspace{2cm}}$



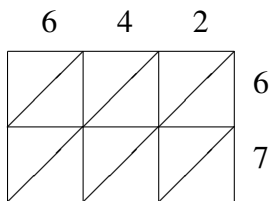
$940 \times 93 = \underline{\hspace{2cm}}$



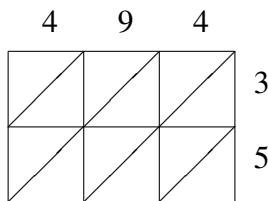
$340 \times 65 = \underline{\hspace{2cm}}$



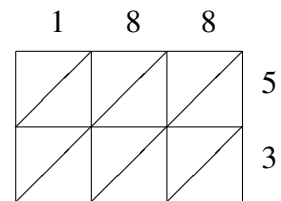
$300 \times 39 = \underline{\hspace{2cm}}$



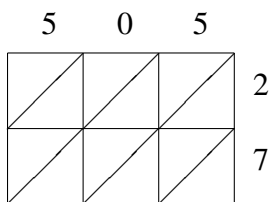
$642 \times 67 = \underline{\hspace{2cm}}$



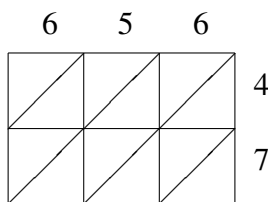
$494 \times 35 = \underline{\hspace{2cm}}$



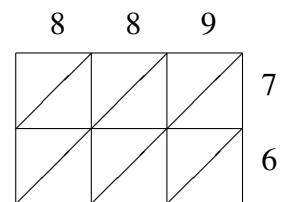
$188 \times 53 = \underline{\hspace{2cm}}$



$505 \times 27 = \underline{\hspace{2cm}}$



$656 \times 47 = \underline{\hspace{2cm}}$



$889 \times 76 = \underline{\hspace{2cm}}$