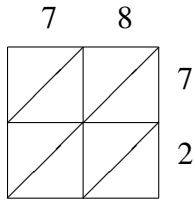
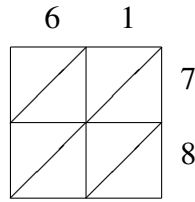


Lattice Multiplication (I)

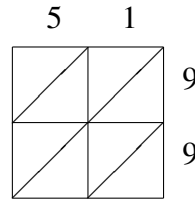
Use lattice multiplication to find each product.



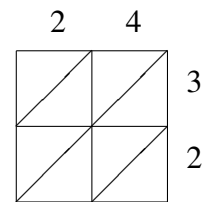
$78 \times 72 = \underline{\hspace{2cm}}$



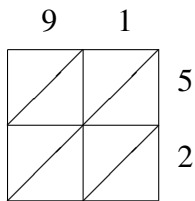
$61 \times 78 = \underline{\hspace{2cm}}$



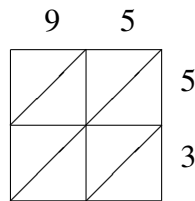
$51 \times 99 = \underline{\hspace{2cm}}$



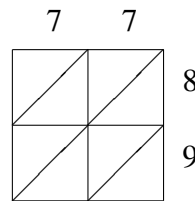
$24 \times 32 = \underline{\hspace{2cm}}$



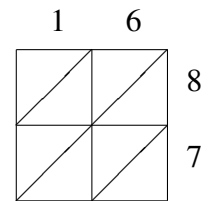
$91 \times 52 = \underline{\hspace{2cm}}$



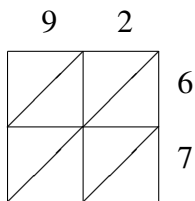
$95 \times 53 = \underline{\hspace{2cm}}$



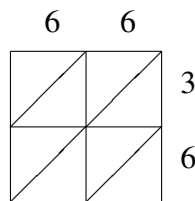
$77 \times 89 = \underline{\hspace{2cm}}$



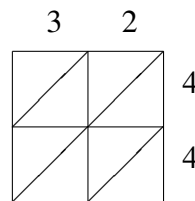
$16 \times 87 = \underline{\hspace{2cm}}$



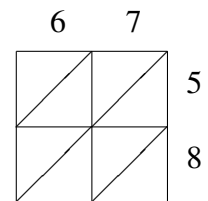
$92 \times 67 = \underline{\hspace{2cm}}$



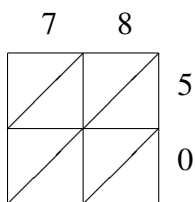
$66 \times 36 = \underline{\hspace{2cm}}$



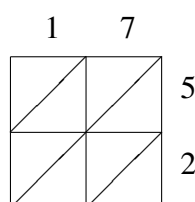
$32 \times 44 = \underline{\hspace{2cm}}$



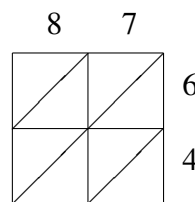
$67 \times 58 = \underline{\hspace{2cm}}$



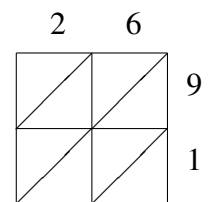
$78 \times 50 = \underline{\hspace{2cm}}$



$17 \times 52 = \underline{\hspace{2cm}}$



$87 \times 64 = \underline{\hspace{2cm}}$



$26 \times 91 = \underline{\hspace{2cm}}$