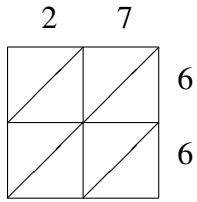
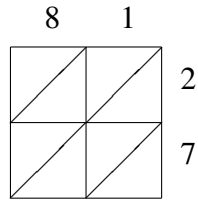


Lattice Multiplication (G)

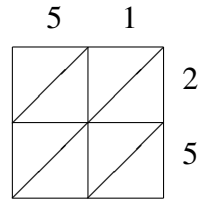
Use lattice multiplication to find each product.



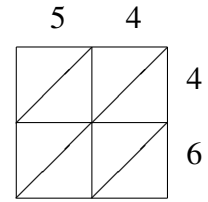
$27 \times 66 = \underline{\hspace{2cm}}$



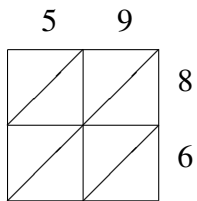
$81 \times 27 = \underline{\hspace{2cm}}$



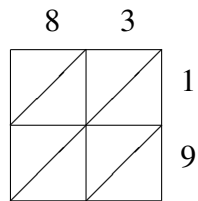
$51 \times 25 = \underline{\hspace{2cm}}$



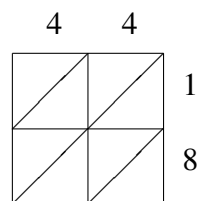
$54 \times 46 = \underline{\hspace{2cm}}$



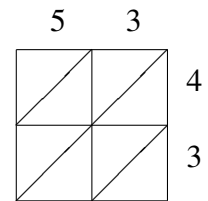
$59 \times 86 = \underline{\hspace{2cm}}$



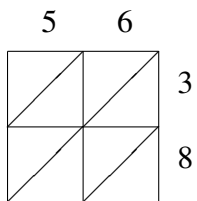
$83 \times 19 = \underline{\hspace{2cm}}$



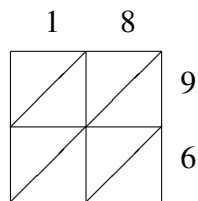
$44 \times 18 = \underline{\hspace{2cm}}$



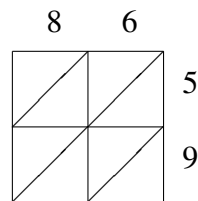
$53 \times 43 = \underline{\hspace{2cm}}$



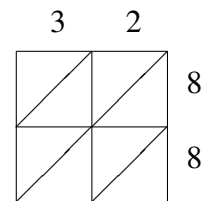
$56 \times 38 = \underline{\hspace{2cm}}$



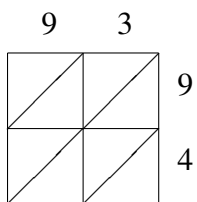
$18 \times 96 = \underline{\hspace{2cm}}$



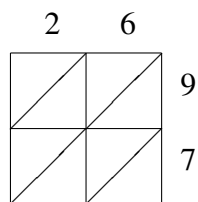
$86 \times 59 = \underline{\hspace{2cm}}$



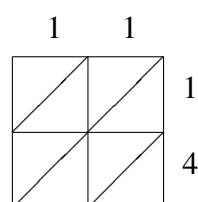
$32 \times 88 = \underline{\hspace{2cm}}$



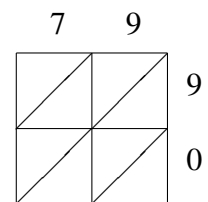
$93 \times 94 = \underline{\hspace{2cm}}$



$26 \times 97 = \underline{\hspace{2cm}}$



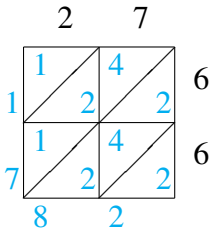
$11 \times 14 = \underline{\hspace{2cm}}$



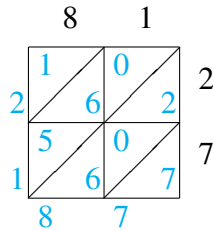
$79 \times 90 = \underline{\hspace{2cm}}$

Lattice Multiplication (G) Answers

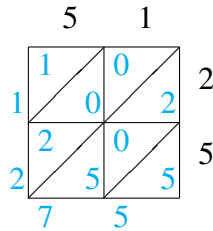
Use lattice multiplication to find each product.



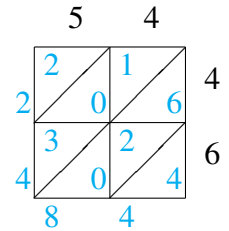
$27 \times 66 = 1,782$



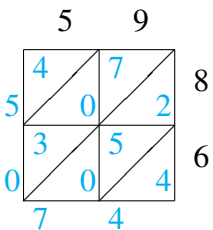
$81 \times 27 = 2,187$



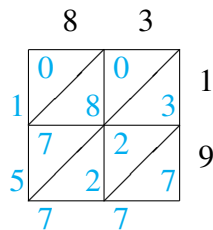
$51 \times 25 = 1,275$



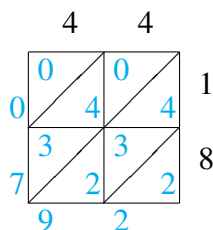
$54 \times 46 = 2,484$



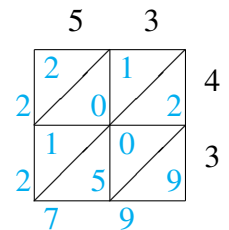
$59 \times 86 = 5,074$



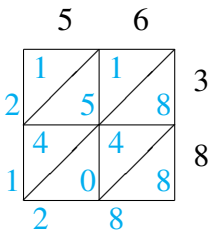
$83 \times 19 = 1,577$



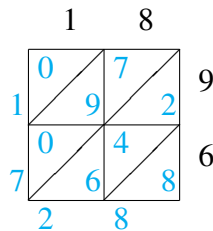
$44 \times 18 = 792$



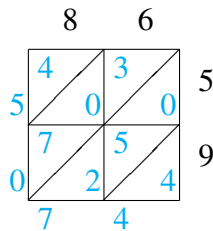
$53 \times 43 = 2,279$



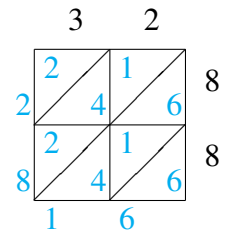
$56 \times 38 = 2,128$



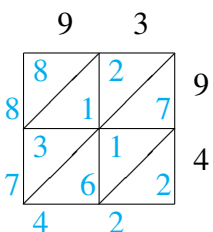
$18 \times 96 = 1,728$



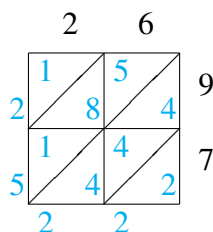
$86 \times 59 = 5,074$



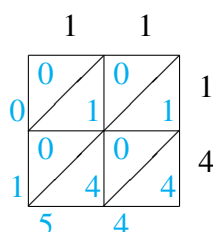
$32 \times 88 = 2,816$



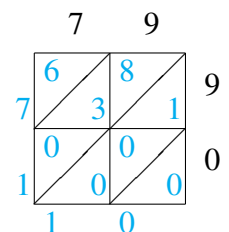
$93 \times 94 = 8,742$



$26 \times 97 = 2,522$



$11 \times 14 = 154$



$79 \times 90 = 7,110$