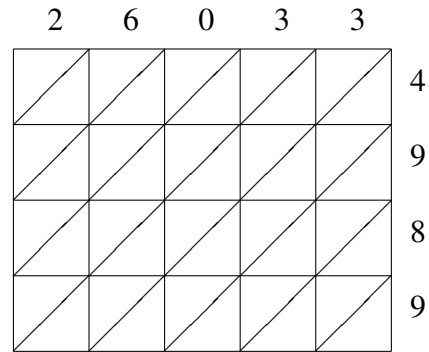
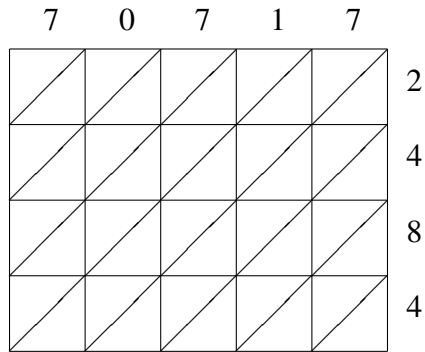


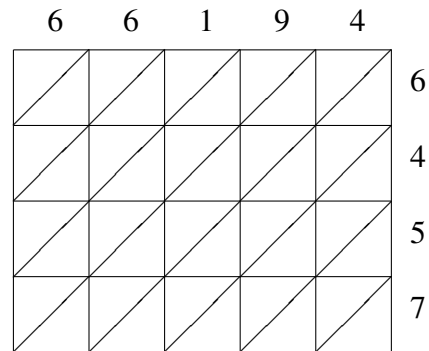
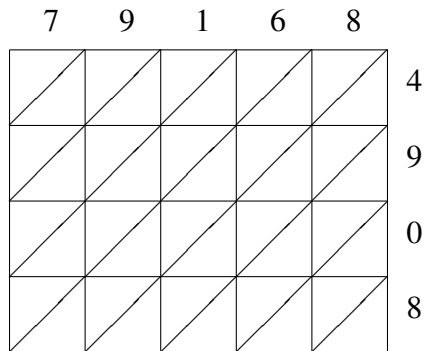
Lattice Multiplication (I)

Use lattice multiplication to find each product.



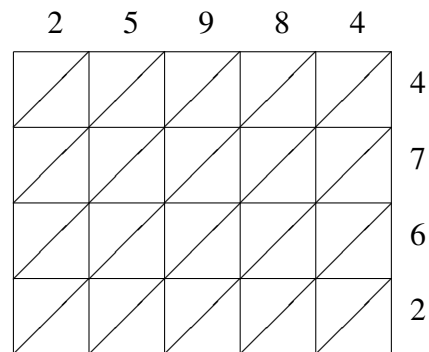
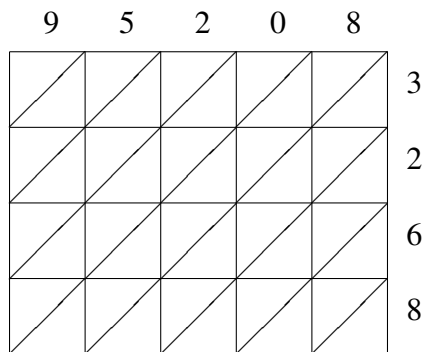
$70717 \times 2484 = \underline{\hspace{2cm}}$

$26033 \times 4989 = \underline{\hspace{2cm}}$



$79168 \times 4908 = \underline{\hspace{2cm}}$

$66194 \times 6457 = \underline{\hspace{2cm}}$

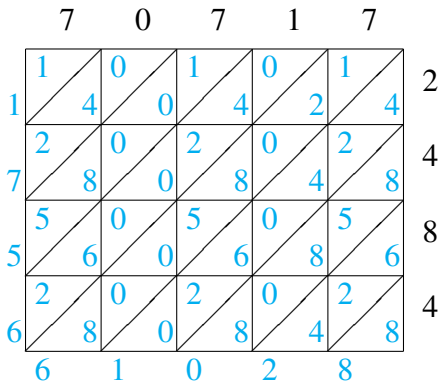


$95208 \times 3268 = \underline{\hspace{2cm}}$

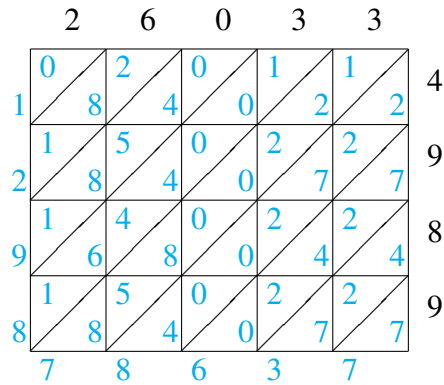
$25984 \times 4762 = \underline{\hspace{2cm}}$

Lattice Multiplication (I) Answers

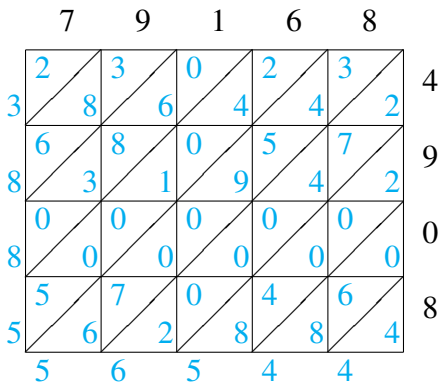
Use lattice multiplication to find each product.



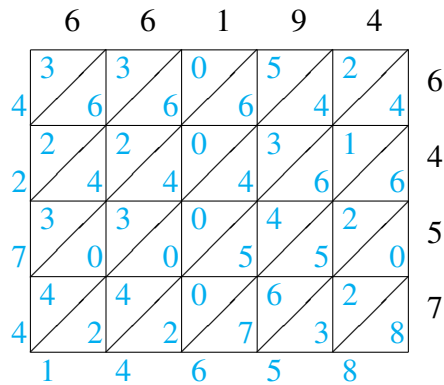
$$70717 \times 2484 = 175,661,028$$



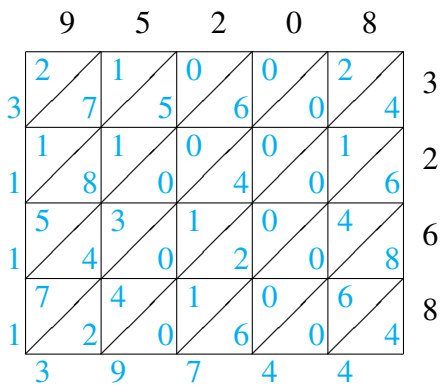
$$26033 \times 4989 = 129,878,637$$



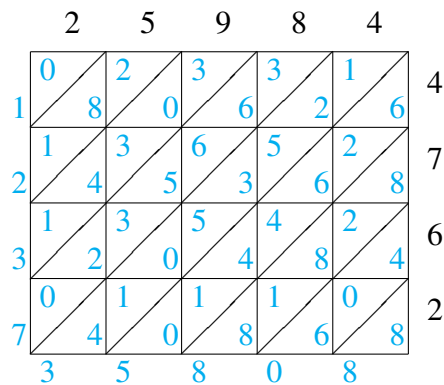
$$79168 \times 4908 = 388,556,544$$



$$66194 \times 6457 = 427,414,658$$



$$95208 \times 3268 = 311,139,744$$



$$25984 \times 4762 = 123,735,808$$