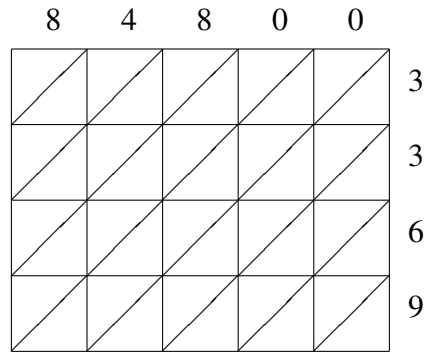
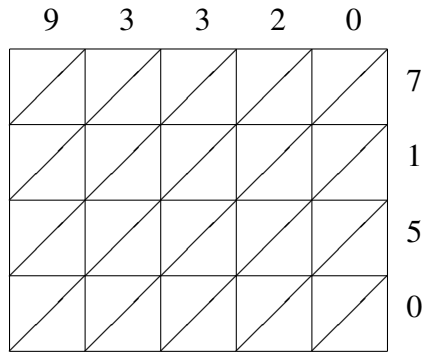


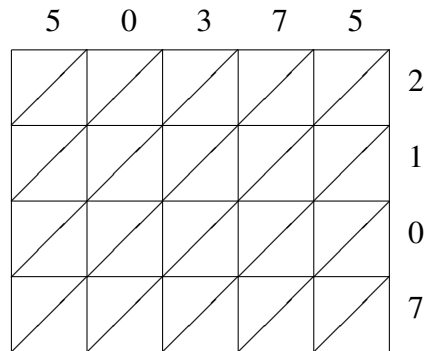
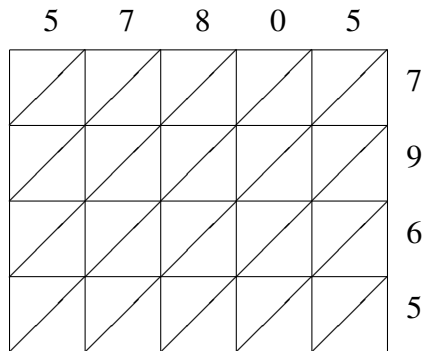
Lattice Multiplication (H)

Use lattice multiplication to find each product.



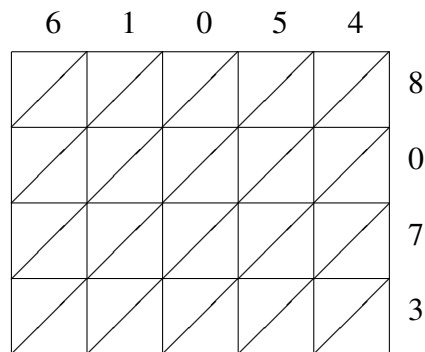
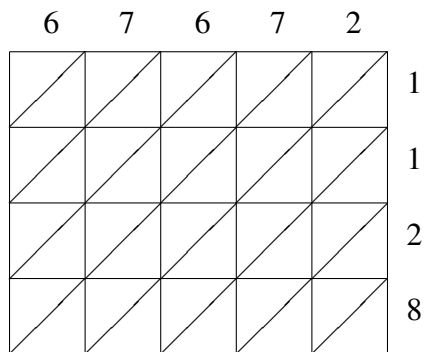
$93320 \times 7150 = \underline{\hspace{2cm}}$

$84800 \times 3369 = \underline{\hspace{2cm}}$



$57805 \times 7965 = \underline{\hspace{2cm}}$

$50375 \times 2107 = \underline{\hspace{2cm}}$



$67672 \times 1128 = \underline{\hspace{2cm}}$

$61054 \times 8073 = \underline{\hspace{2cm}}$