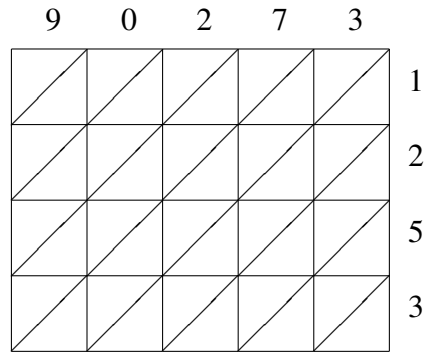
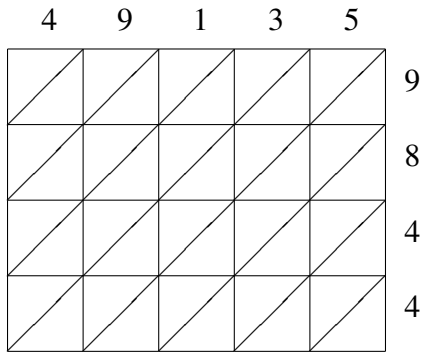


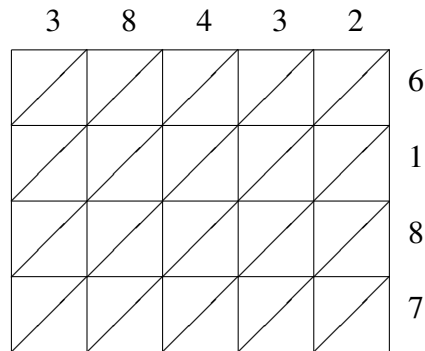
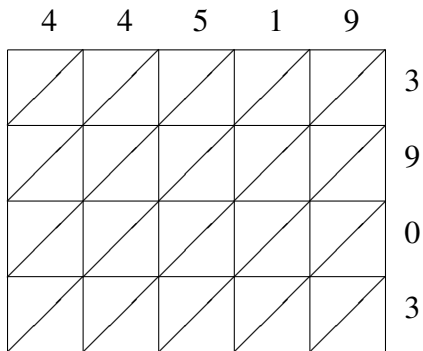
# Lattice Multiplication (F)

Use lattice multiplication to find each product.



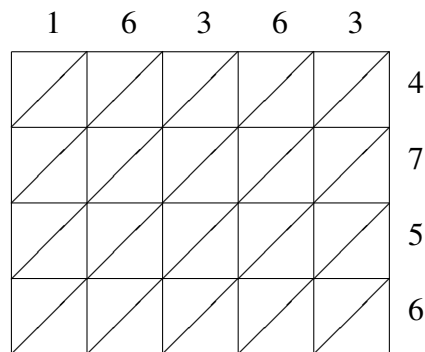
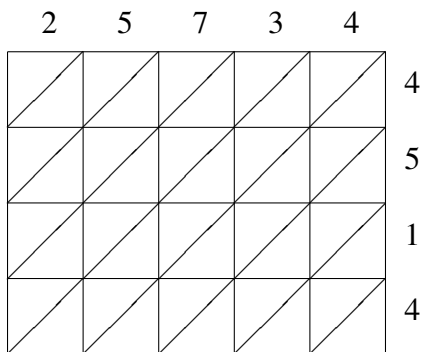
$49135 \times 9844 = \underline{\hspace{2cm}}$

$90273 \times 1253 = \underline{\hspace{2cm}}$



$44519 \times 3903 = \underline{\hspace{2cm}}$

$38432 \times 6187 = \underline{\hspace{2cm}}$



$25734 \times 4514 = \underline{\hspace{2cm}}$

$16363 \times 4756 = \underline{\hspace{2cm}}$