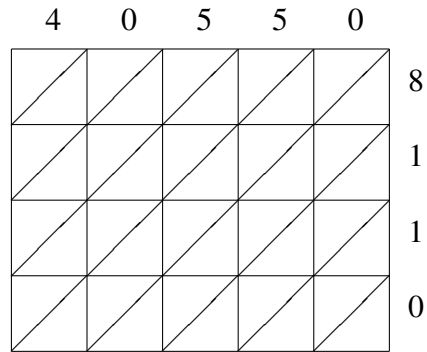
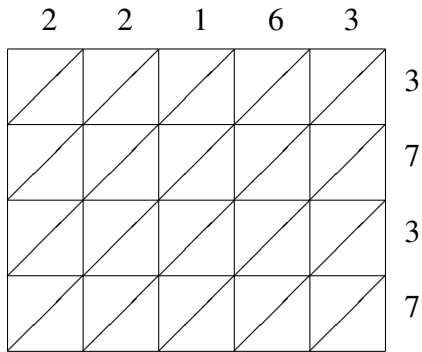


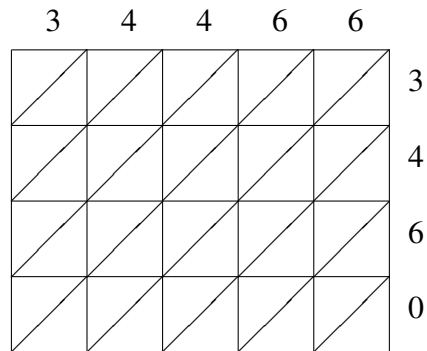
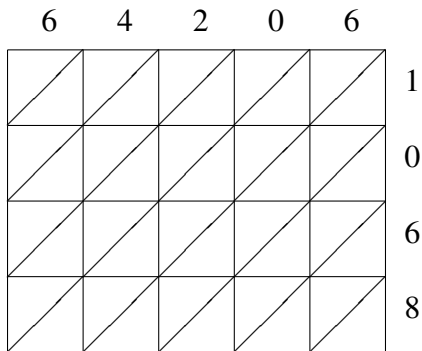
# Lattice Multiplication (C)

Use lattice multiplication to find each product.



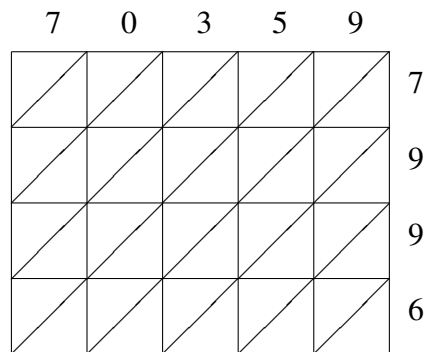
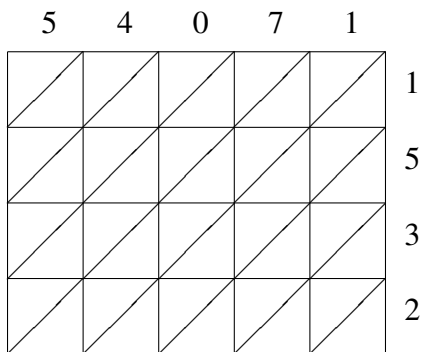
$22163 \times 3737 = \underline{\hspace{2cm}}$

$40550 \times 8110 = \underline{\hspace{2cm}}$



$64206 \times 1068 = \underline{\hspace{2cm}}$

$34466 \times 3460 = \underline{\hspace{2cm}}$



$54071 \times 1532 = \underline{\hspace{2cm}}$

$70359 \times 7996 = \underline{\hspace{2cm}}$