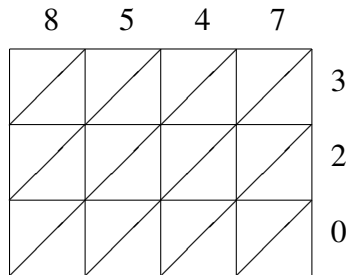
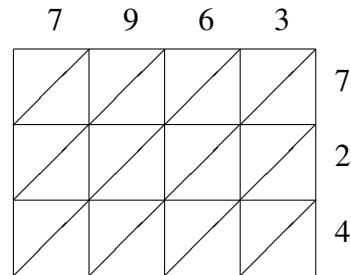


Lattice Multiplication (I)

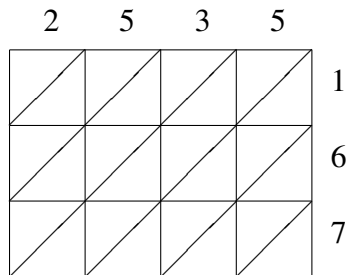
Use lattice multiplication to find each product.



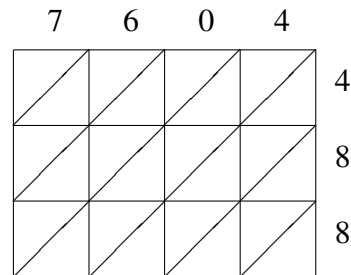
$8547 \times 320 = \underline{\hspace{2cm}}$



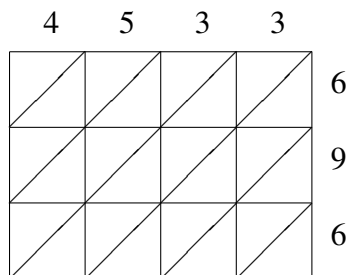
$7963 \times 724 = \underline{\hspace{2cm}}$



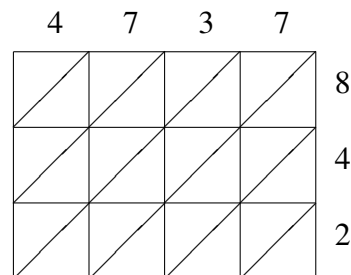
$2535 \times 167 = \underline{\hspace{2cm}}$



$7604 \times 488 = \underline{\hspace{2cm}}$



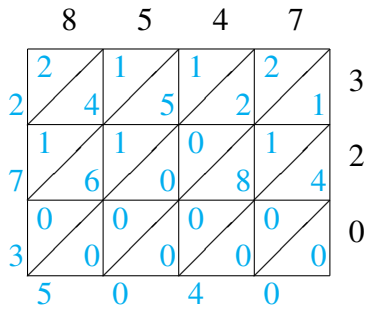
$4533 \times 696 = \underline{\hspace{2cm}}$



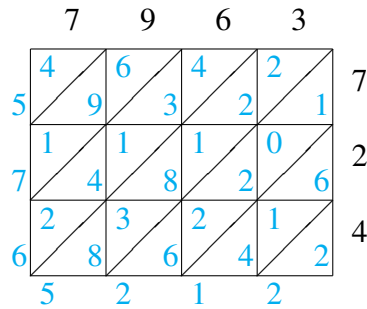
$4737 \times 842 = \underline{\hspace{2cm}}$

Lattice Multiplication (I) Answers

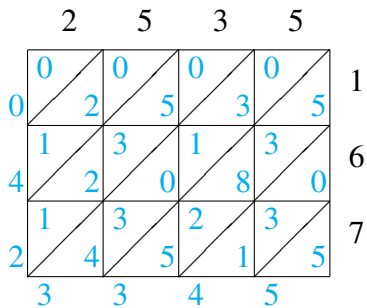
Use lattice multiplication to find each product.



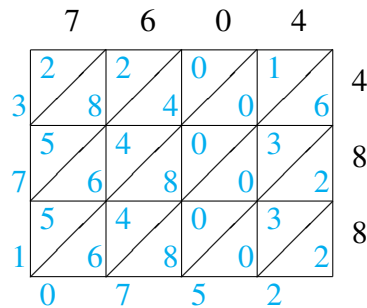
$$8547 \times 320 = 2,735,040$$



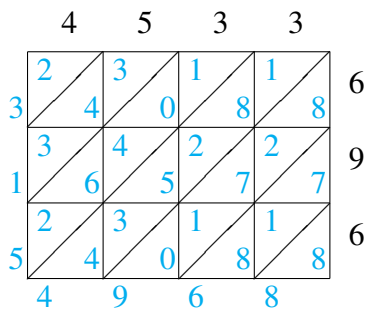
$$7963 \times 724 = 5,765,212$$



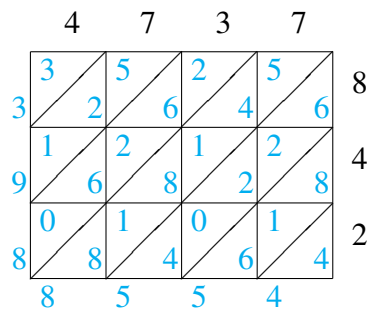
$$2535 \times 167 = 423,345$$



$$7604 \times 488 = 3,710,752$$



$$4533 \times 696 = 3,154,968$$



$$4737 \times 842 = 3,988,554$$