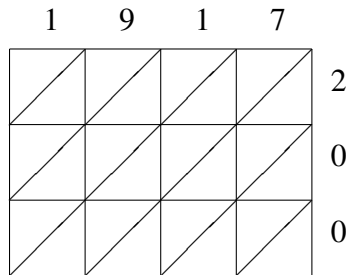
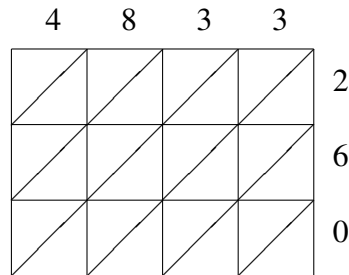


Lattice Multiplication (H)

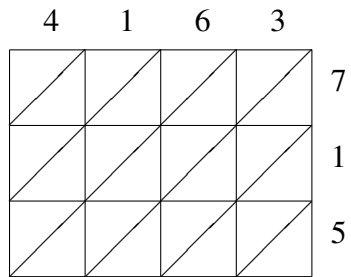
Use lattice multiplication to find each product.



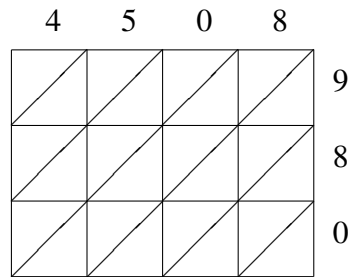
$1917 \times 200 = \underline{\hspace{2cm}}$



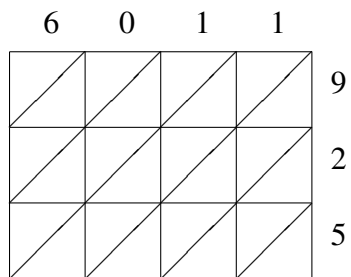
$4833 \times 260 = \underline{\hspace{2cm}}$



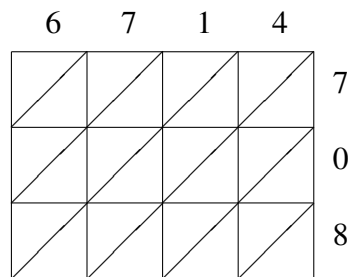
$4163 \times 715 = \underline{\hspace{2cm}}$



$4508 \times 980 = \underline{\hspace{2cm}}$



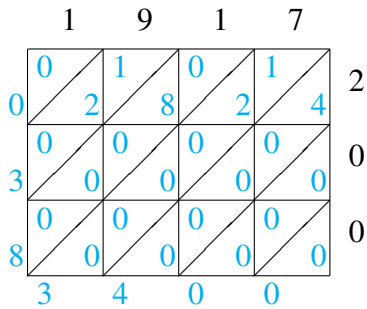
$6011 \times 925 = \underline{\hspace{2cm}}$



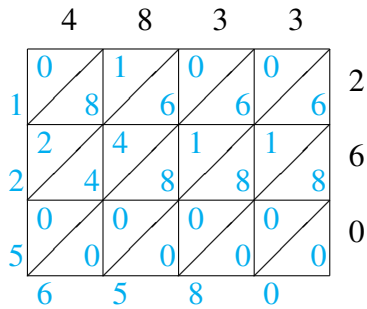
$6714 \times 708 = \underline{\hspace{2cm}}$

Lattice Multiplication (H) Answers

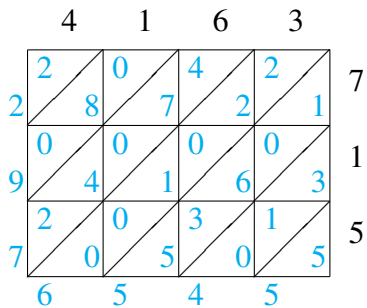
Use lattice multiplication to find each product.



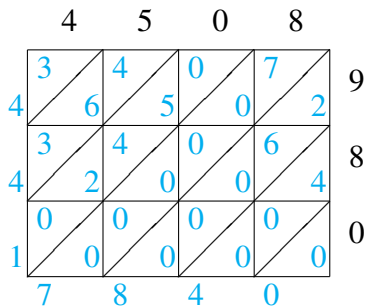
$$1917 \times 200 = 383,400$$



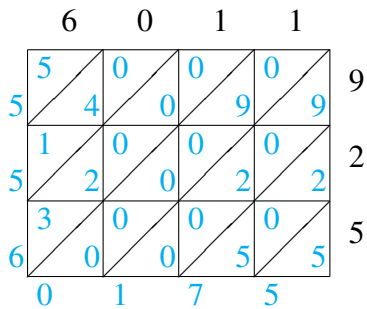
$$4833 \times 260 = 1,256,580$$



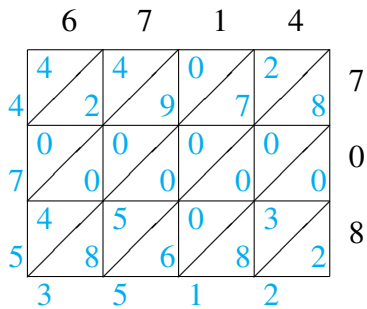
$$4163 \times 715 = 2,976,545$$



$$4508 \times 980 = 4,417,840$$



$$6011 \times 925 = 5,560,175$$



$$6714 \times 708 = 4,753,512$$