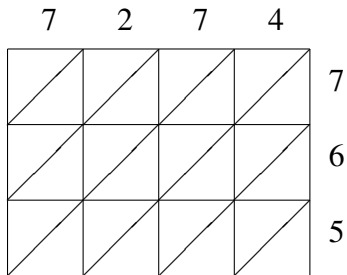
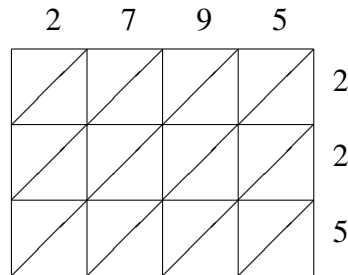


Lattice Multiplication (F)

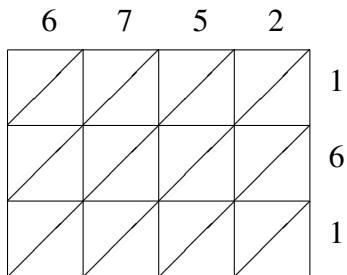
Use lattice multiplication to find each product.



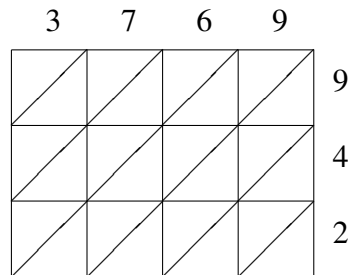
$7274 \times 765 = \underline{\hspace{2cm}}$



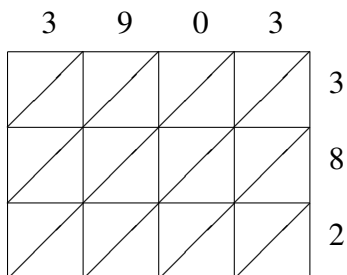
$2795 \times 225 = \underline{\hspace{2cm}}$



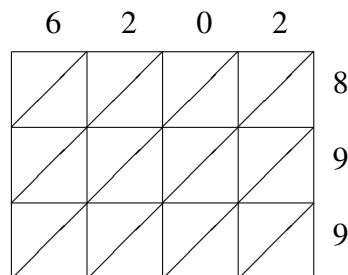
$6752 \times 161 = \underline{\hspace{2cm}}$



$3769 \times 942 = \underline{\hspace{2cm}}$



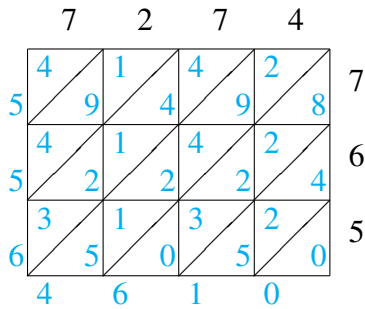
$3903 \times 382 = \underline{\hspace{2cm}}$



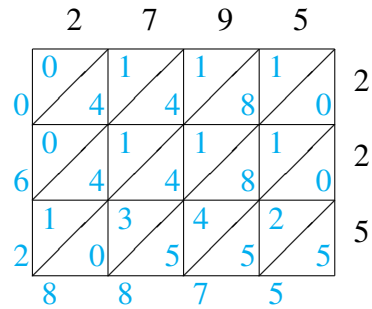
$6202 \times 899 = \underline{\hspace{2cm}}$

Lattice Multiplication (F) Answers

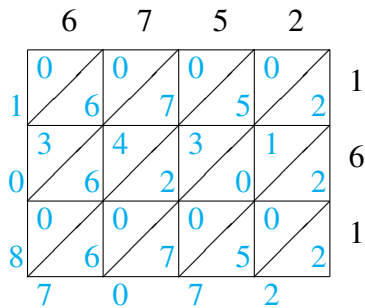
Use lattice multiplication to find each product.



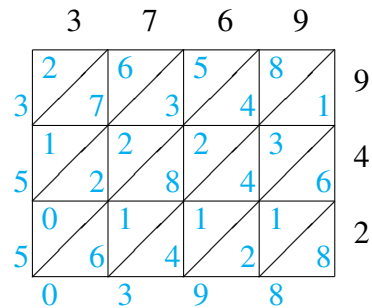
$$7274 \times 765 = 5,564,610$$



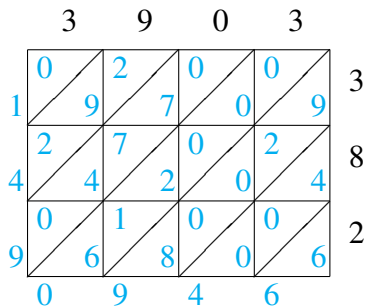
$$2795 \times 225 = 628,875$$



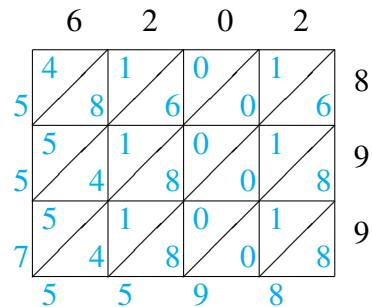
$$6752 \times 161 = 1,087,072$$



$$3769 \times 942 = 3,550,398$$



$$3903 \times 382 = 1,490,946$$



$$6202 \times 899 = 5,575,598$$