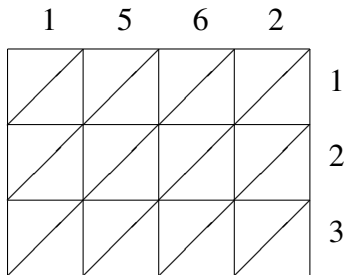
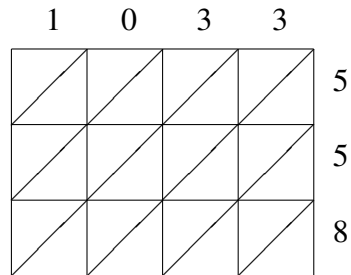


Lattice Multiplication (B)

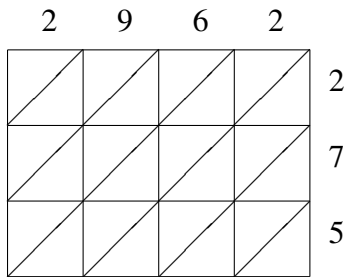
Use lattice multiplication to find each product.



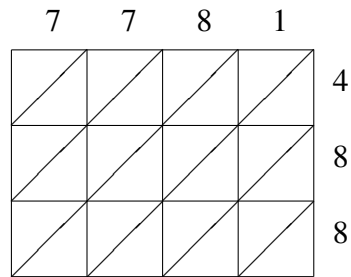
$1562 \times 123 = \underline{\hspace{2cm}}$



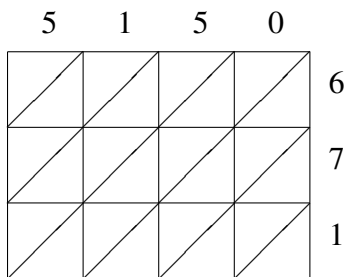
$1033 \times 558 = \underline{\hspace{2cm}}$



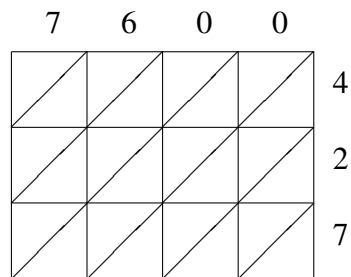
$2962 \times 275 = \underline{\hspace{2cm}}$



$7781 \times 488 = \underline{\hspace{2cm}}$



$5150 \times 671 = \underline{\hspace{2cm}}$



$7600 \times 427 = \underline{\hspace{2cm}}$