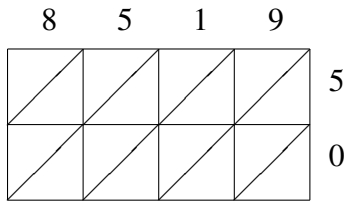
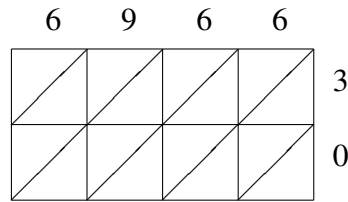


# Lattice Multiplication (I)

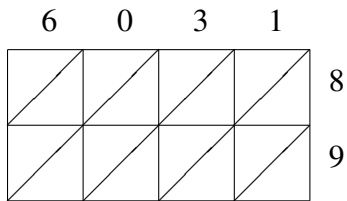
Use lattice multiplication to find each product.



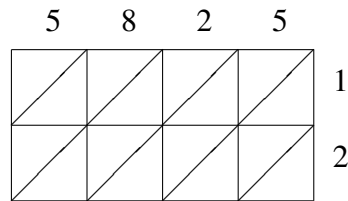
$8519 \times 50 = \underline{\hspace{2cm}}$



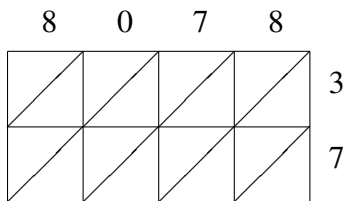
$6966 \times 30 = \underline{\hspace{2cm}}$



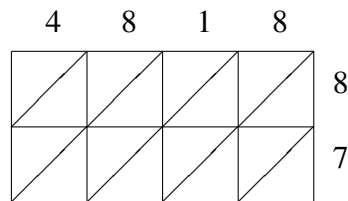
$6031 \times 89 = \underline{\hspace{2cm}}$



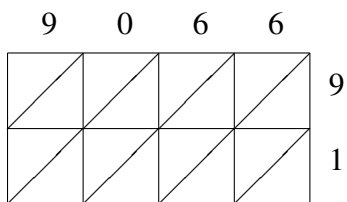
$5825 \times 12 = \underline{\hspace{2cm}}$



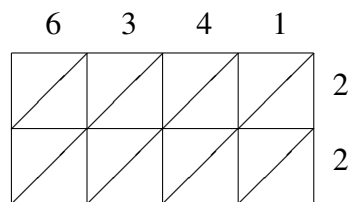
$8078 \times 37 = \underline{\hspace{2cm}}$



$4818 \times 87 = \underline{\hspace{2cm}}$



$9066 \times 91 = \underline{\hspace{2cm}}$



$6341 \times 22 = \underline{\hspace{2cm}}$