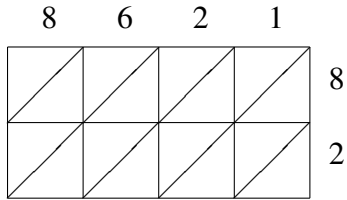
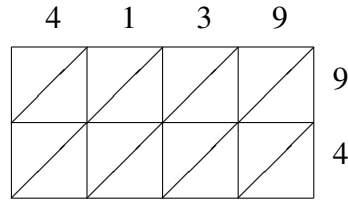


Lattice Multiplication (G)

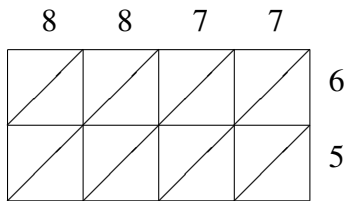
Use lattice multiplication to find each product.



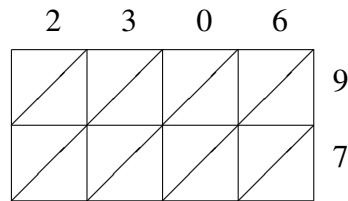
$8621 \times 82 = \underline{\hspace{2cm}}$



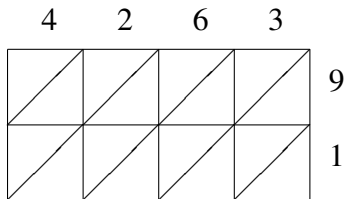
$4139 \times 94 = \underline{\hspace{2cm}}$



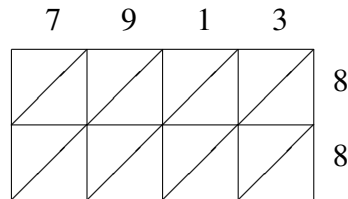
$8877 \times 65 = \underline{\hspace{2cm}}$



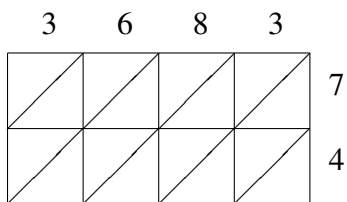
$2306 \times 97 = \underline{\hspace{2cm}}$



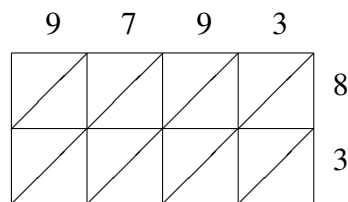
$4263 \times 91 = \underline{\hspace{2cm}}$



$7913 \times 88 = \underline{\hspace{2cm}}$



$3683 \times 74 = \underline{\hspace{2cm}}$



$9793 \times 83 = \underline{\hspace{2cm}}$