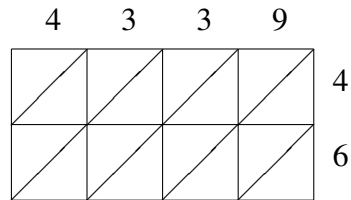
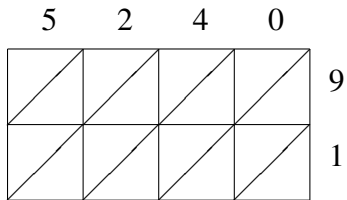


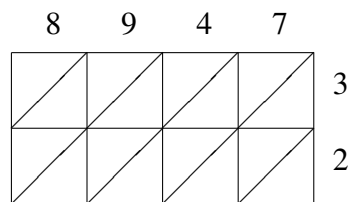
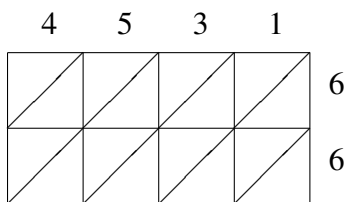
# Lattice Multiplication (F)

Use lattice multiplication to find each product.



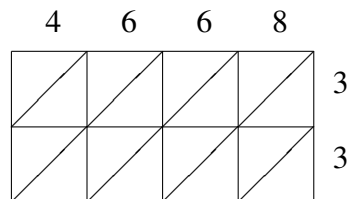
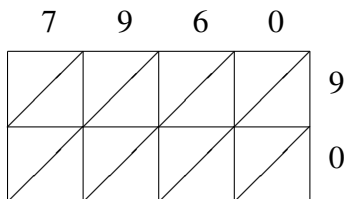
$5240 \times 91 = \underline{\hspace{2cm}}$

$4339 \times 46 = \underline{\hspace{2cm}}$



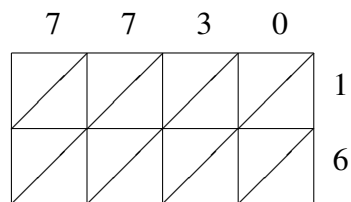
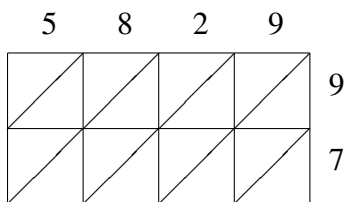
$4531 \times 66 = \underline{\hspace{2cm}}$

$8947 \times 32 = \underline{\hspace{2cm}}$



$7960 \times 90 = \underline{\hspace{2cm}}$

$4668 \times 33 = \underline{\hspace{2cm}}$



$5829 \times 97 = \underline{\hspace{2cm}}$

$7730 \times 16 = \underline{\hspace{2cm}}$