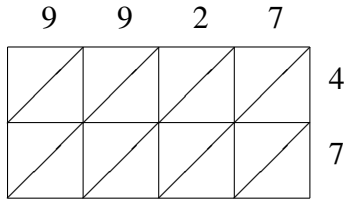
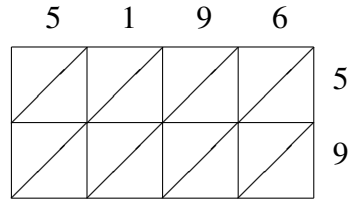


Lattice Multiplication (C)

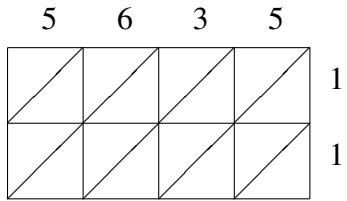
Use lattice multiplication to find each product.



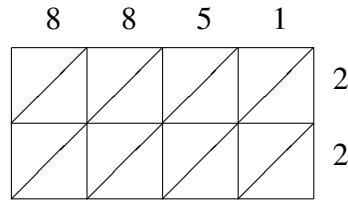
$9927 \times 47 = \underline{\hspace{2cm}}$



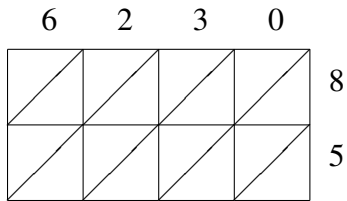
$5196 \times 59 = \underline{\hspace{2cm}}$



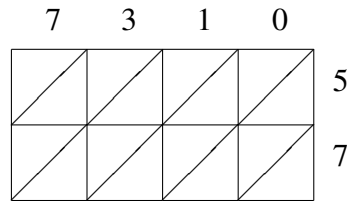
$5635 \times 11 = \underline{\hspace{2cm}}$



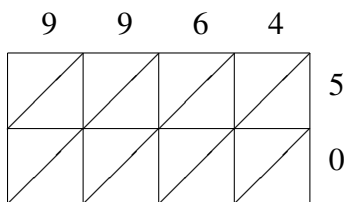
$8851 \times 22 = \underline{\hspace{2cm}}$



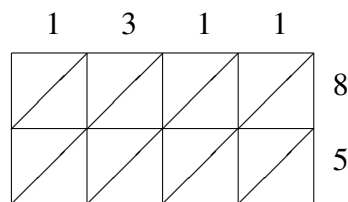
$6230 \times 85 = \underline{\hspace{2cm}}$



$7310 \times 57 = \underline{\hspace{2cm}}$



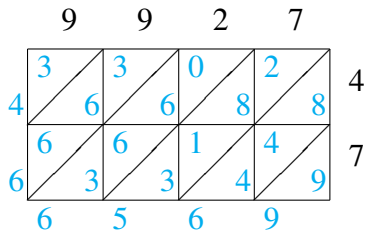
$9964 \times 50 = \underline{\hspace{2cm}}$



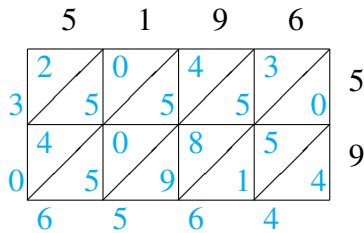
$1311 \times 85 = \underline{\hspace{2cm}}$

Lattice Multiplication (C) Answers

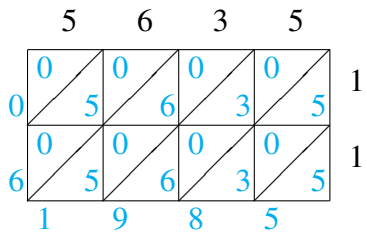
Use lattice multiplication to find each product.



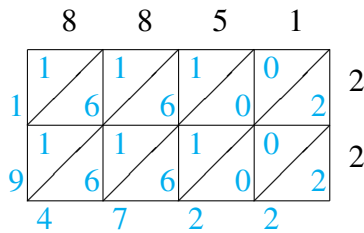
$$9927 \times 47 = 466,569$$



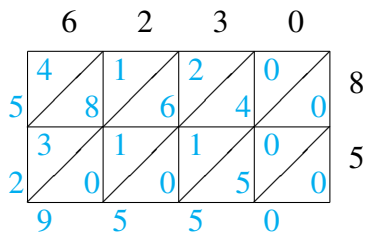
$$5196 \times 59 = 306,564$$



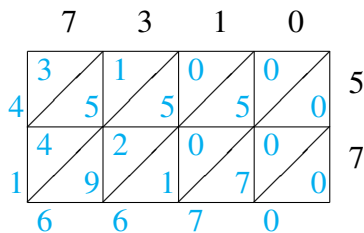
$$5635 \times 11 = 61,985$$



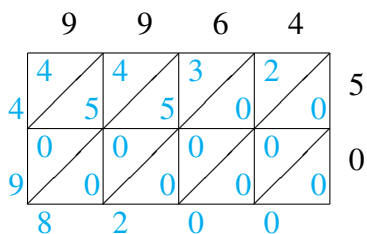
$$8851 \times 22 = 194,722$$



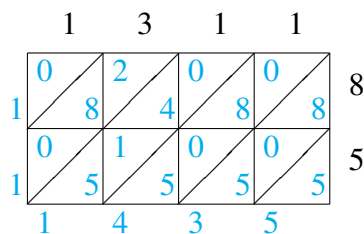
$$6230 \times 85 = 529,550$$



$$7310 \times 57 = 416,670$$



$$9964 \times 50 = 498,200$$



$$1311 \times 85 = 111,435$$