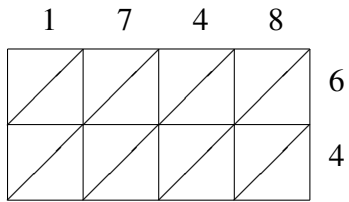
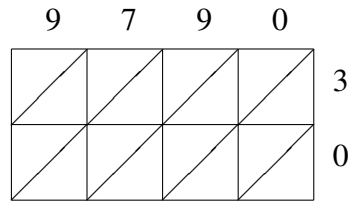


Lattice Multiplication (B)

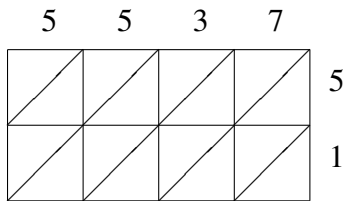
Use lattice multiplication to find each product.



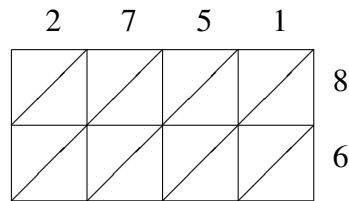
$1748 \times 64 = \underline{\hspace{2cm}}$



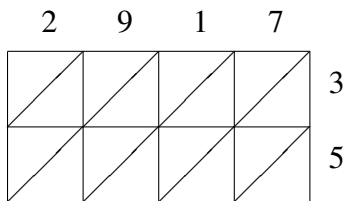
$9790 \times 30 = \underline{\hspace{2cm}}$



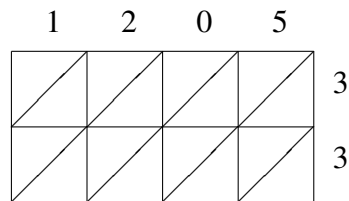
$5537 \times 51 = \underline{\hspace{2cm}}$



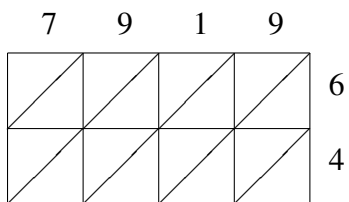
$2751 \times 86 = \underline{\hspace{2cm}}$



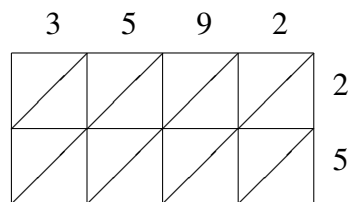
$2917 \times 35 = \underline{\hspace{2cm}}$



$1205 \times 33 = \underline{\hspace{2cm}}$



$7919 \times 64 = \underline{\hspace{2cm}}$



$3592 \times 25 = \underline{\hspace{2cm}}$