


# Next Dollar Up (A)

How many dollars do you need? Draw or write how many.



\$1.91

\$2.53

\$0.29

\$0.54

\$2.12

\$3.31

\$2.76

\$0.05

\$1.57

\$1.63

\$1.75

\$0.22

\$4.01

\$0.33

\$3.26


\$2.22

\$2.53

\$2.23

# Next Dollar Up (A) Answers

How many dollars do you need? Draw or write how many.



\$1.91

\$2

\$2.53

\$3

\$0.29

\$1

\$0.54

\$1

\$2.12

\$3

\$3.31

\$4

\$2.76

\$3

\$0.05

\$1

\$1.57

\$2

\$1.63

\$2

\$1.75

\$2

\$0.22

\$1

\$4.01

\$5

\$0.33

\$1

\$3.26

\$4

\$2.22

\$3

\$2.53

\$3

\$2.23

\$3

# Next Dollar Up (B)

How many dollars do you need? Draw or write how many.



\$4.45

\$0.68

\$1.34

\$0.54

\$2.85

\$1.31

\$1.50

\$2.67

\$2.06

\$1.02

\$1.80

\$2.70

\$2.03

\$3.12

\$3.93

\$3.76

\$3.01

\$0.79

# Next Dollar Up (B) Answers

How many dollars do you need? Draw or write how many.



\$4.45

\$5

\$0.68

\$1

\$1.34

\$2

\$0.54

\$1

\$2.85

\$3

\$1.31

\$2

\$1.50

\$2

\$2.67

\$3

\$2.06

\$3

\$1.02

\$2

\$1.80

\$2

\$2.70

\$3

\$2.03

\$3

\$3.12

\$4

\$3.93

\$4

\$3.76

\$4

\$3.01

\$4

\$0.79

\$1

# Next Dollar Up (C)

How many dollars do you need? Draw or write how many.



\$3.75

\$1.22

\$4.57

\$4.12

\$2.05

\$4.67

\$3.17

\$0.42

\$4.30

\$2.41

\$1.19

\$3.28

\$2.57

\$2.49

\$3.29

\$2.71

\$2.97

\$1.69

# Next Dollar Up (C) Answers

How many dollars do you need? Draw or write how many.



\$3.75

\$4

\$1.22

\$2

\$4.57

\$5

\$4.12

\$5

\$2.05

\$3

\$4.67

\$5

\$3.17

\$4

\$0.42

\$1

\$4.30

\$5

\$2.41

\$3

\$1.19

\$2

\$3.28

\$4

\$2.57

\$3

\$2.49

\$3

\$3.29

\$4

\$2.71

\$3

\$2.97

\$3

\$1.69

\$2

# Next Dollar Up (D)

How many dollars do you need? Draw or write how many.



\$1.34

\$2.52

\$3.14

\$0.01

\$2.78

\$3.00

\$1.10

\$4.63

\$3.14

\$3.42

\$3.55

\$2.86

\$4.61

\$1.22

\$4.97

\$0.52

\$2.18

\$1.59

# Next Dollar Up (D) Answers

How many dollars do you need? Draw or write how many.



\$1.34

\$2

\$2.52

\$3

\$3.14

\$4

\$0.01

\$1

\$2.78

\$3

\$3.00

\$3

\$1.10

\$2

\$4.63

\$5

\$3.14

\$4

\$3.42

\$4

\$3.55

\$4

\$2.86

\$3

\$4.61

\$5

\$1.22

\$2

\$4.97

\$5

\$0.52

\$1

\$2.18

\$3


\$1.59

\$2



# Next Dollar Up (E)

How many dollars do you need? Draw or write how many.



\$4.47

\$1.69

\$3.13

\$4.02

\$2.01

\$1.03

\$0.38

\$4.79

\$1.98

\$1.28

\$0.16

\$4.51

\$2.82

\$1.43

\$3.07

\$0.96

\$2.50

\$3.04

# Next Dollar Up (E) Answers

How many dollars do you need? Draw or write how many.



\$4.47

\$5

\$1.69

\$2

\$3.13

\$4

\$4.02

\$5

\$2.01

\$3

\$1.03

\$2

\$0.38

\$1

\$4.79

\$5

\$1.98

\$2

\$1.28

\$2

\$0.16

\$1

\$4.51

\$5

\$2.82

\$3

\$1.43

\$2

\$3.07

\$4

\$0.96

\$1

\$2.50


\$3

\$3.04

\$4

# Next Dollar Up (F)

How many dollars do you need? Draw or write how many.



\$4.73

\$2.05

\$1.84

\$4.40

\$3.20

\$2.01

\$0.65

\$2.73

\$0.66

\$0.89

\$3.05

\$2.81

\$4.35

\$3.59

\$1.35

\$3.86

\$1.29

\$4.91

# Next Dollar Up (F) Answers

How many dollars do you need? Draw or write how many.



\$4.73

\$5

\$2.05

\$3

\$1.84

\$2

\$4.40

\$5

\$3.20

\$4

\$2.01

\$3

\$0.65

\$1

\$2.73

\$3

\$0.66

\$1

\$0.89

\$1

\$3.05

\$4

\$2.81

\$3

\$4.35

\$5

\$3.59

\$4

\$1.35

\$2

\$3.86

\$4

\$1.29

\$2

\$4.91

\$5

# Next Dollar Up (G)

How many dollars do you need? Draw or write how many.



\$0.02

\$3.65

\$4.98

\$2.94

\$0.37

\$2.83

\$0.34

\$0.04

\$0.57

\$0.48

\$4.65

\$0.65

\$0.99

\$3.56

\$2.00

\$3.21

\$4.90

\$4.88

# Next Dollar Up (G) Answers

How many dollars do you need? Draw or write how many.



\$0.02

\$1

\$3.65

\$4

\$4.98

\$5

\$2.94

\$3

\$0.37

\$1

\$2.83

\$3

\$0.34

\$1

\$0.04

\$1

\$0.57

\$1

\$0.48

\$1

\$4.65

\$5

\$0.65

\$1

\$0.99

\$1

\$3.56

\$4

\$2.00

\$2

\$3.21

\$4

\$4.90


\$5

\$4.88

\$5

# Next Dollar Up (H)

How many dollars do you need? Draw or write how many.



\$0.49

\$3.49

\$3.19

\$1.04

\$1.02

\$1.82

\$0.20

\$3.51

\$4.78

\$3.05

\$1.81

\$0.56

\$1.83

\$2.49

\$1.55

\$3.80

\$1.54

\$2.24

# Next Dollar Up (H) Answers

How many dollars do you need? Draw or write how many.



\$0.49

\$1

\$3.49

\$4

\$3.19

\$4

\$1.04

\$2

\$1.02

\$2

\$1.82

\$2

\$0.20

\$1

\$3.51

\$4

\$4.78

\$5

\$3.05

\$4

\$1.81

\$2

\$0.56

\$1

\$1.83

\$2

\$2.49

\$3

\$1.55

\$2

\$3.80

\$4

\$1.54

\$2

\$2.24

\$3



# Next Dollar Up (I)

How many dollars do you need? Draw or write how many.



\$4.35

\$4.49

\$3.36

\$1.72

\$1.17

\$4.07

\$1.21

\$3.93

\$1.47

\$4.02

\$2.35

\$2.42

\$3.45

\$3.52

\$2.85

\$2.96

\$4.69

\$2.17

# Next Dollar Up (I) Answers

How many dollars do you need? Draw or write how many.



\$4.35

\$5

\$4.49

\$5

\$3.36

\$4

\$1.72

\$2

\$1.17

\$2

\$4.07

\$5

\$1.21

\$2

\$3.93

\$4

\$1.47

\$2

\$4.02

\$5

\$2.35

\$3

\$2.42

\$3

\$3.45

\$4

\$3.52

\$4

\$2.85

\$3

\$2.96

\$3

\$4.69

\$5

\$2.17

\$3

# Next Dollar Up (J)

How many dollars do you need? Draw or write how many.



\$1.67

\$2.54

\$2.76

\$4.55

\$2.75

\$2.57

\$3.26

\$4.72

\$4.60

\$1.77

\$4.43

\$4.05

\$2.84

\$3.39

\$0.77

\$1.15

\$4.37

\$2.15

# Next Dollar Up (J) Answers

How many dollars do you need? Draw or write how many.



\$1.67

\$2

\$2.54

\$3

\$2.76

\$3

\$4.55

\$5

\$2.75

\$3

\$2.57

\$3

\$3.26

\$4

\$4.72

\$5

\$4.60

\$5

\$1.77

\$2

\$4.43

\$5

\$4.05

\$5

\$2.84

\$3

\$3.39

\$4

\$0.77

\$1

\$1.15

\$2

\$4.37

\$5

\$2.15

\$3