

Making Change (B)

Calculate how much change is required for each transaction.

Cost of Items

Amount Paid

Change Required

1. \$37.74



\$100.00

2. \$29.24



\$100.00

3. \$11.18



\$100.00

4. \$77.69



\$100.00

5. \$14.69








\$100.00

Public Domain Images from Wikipedia.

Making Change (B) Answers

Calculate how much change is required for each transaction.

<u>Cost of Items</u>	<u>Amount Paid</u>	<u>Change Required</u>
1. \$37.74	 \$100.00	\$62.26
2. \$29.24	 \$100.00	\$70.76
3. \$11.18	 \$100.00	\$88.82
4. \$77.69	 \$100.00	\$22.31
5. \$14.69	 \$100.00	\$85.31

Public Domain Images from Wikipedia.