

# Making Change (C)

Calculate how much change is required for each transaction.

Cost of Items

Amount Paid

Change Required

1. \$9.05



\$10.00

2. \$1.57



\$10.00

3. \$3.44



\$10.00

4. \$0.81



\$10.00

5. \$1.06







\$10.00

Images from and copyright Reserve Bank of New Zealand.

# Making Change (C) Answers

Calculate how much change is required for each transaction.

	<u>Cost of Items</u>	<u>Amount Paid</u>	<u>Change Required</u>
1.	\$9.05	 \$10.00	\$0.95
2.	\$1.57	 \$10.00	\$8.43
3.	\$3.44	 \$10.00	\$6.56
4.	\$0.81	 \$10.00	\$9.19
5.	\$1.06	 \$10.00	\$8.94

Images from and copyright Reserve Bank of New Zealand.