

Making Change (F)

Calculate how much change is required for each transaction.

Cost of Items

Amount Paid

Change Required

1. \$4.80



\$5.00

2. \$1.22



\$5.00

3. \$2.98



\$5.00

4. \$1.95



\$5.00

5. \$1.68








\$5.00

Images from and copyright Reserve Bank of New Zealand.

Making Change (F) Answers

Calculate how much change is required for each transaction.

	<u>Cost of Items</u>	<u>Amount Paid</u>	<u>Change Required</u>
1.	\$4.80	 \$5.00	\$0.20
2.	\$1.22	 \$5.00	\$3.78
3.	\$2.98	 \$5.00	\$2.02
4.	\$1.95	 \$5.00	\$3.05
5.	\$1.68	 \$5.00	\$3.32

Images from and copyright Reserve Bank of New Zealand.