




Making Change (B)


Calculate how much change is required for each transaction.

	<u>Cost of Items</u>	<u>Amount Paid</u>	<u>Change Required</u>
1.	\$1.34	 \$5.00	
2.	\$2.87	 \$5.00	
3.	\$2.81	 \$5.00	
4.	\$4.12	 \$5.00	
5.	\$0.91	 \$5.00	

Images from and copyright Reserve Bank of New Zealand.

Making Change (B) Answers

Calculate how much change is required for each transaction.

	<u>Cost of Items</u>	<u>Amount Paid</u>	<u>Change Required</u>
1.	\$1.34	 \$5.00	\$3.66
2.	\$2.87	 \$5.00	\$2.13
3.	\$2.81	 \$5.00	\$2.19
4.	\$4.12	 \$5.00	\$0.88
5.	\$0.91	 \$5.00	\$4.09

Images from and copyright Reserve Bank of New Zealand.