

Making Change (A)

Calculate how much change is required for each transaction.

Cost of Items

Amount Paid

Change Required

1. \$3.08



\$5.00

2. \$1.30



\$5.00

3. \$2.53



\$5.00

4. \$1.58



\$5.00

5. \$0.07






\$5.00

Images from and copyright Reserve Bank of New Zealand.

Making Change (A) Answers

Calculate how much change is required for each transaction.

	<u>Cost of Items</u>	<u>Amount Paid</u>	<u>Change Required</u>
1.	\$3.08	 \$5.00	\$1.92
2.	\$1.30	 \$5.00	\$3.70
3.	\$2.53	 \$5.00	\$2.47
4.	\$1.58	 \$5.00	\$3.42
5.	\$0.07	 \$5.00	\$4.93

Images from and copyright Reserve Bank of New Zealand.