




Making Change (H)

Calculate how much change is required for each transaction.

	<u>Cost of Items</u>	<u>Amount Paid</u>	<u>Change Required</u>
1.	€7.31	 €10.00	
2.	€3.24	 €10.00	
3.	€6.00	 €10.00	
4.	€1.63	 €10.00	
5.	€6.10	 €10.00	

Images from the European Central Bank and used under their reproduction rules.

Making Change (H) Answers

Calculate how much change is required for each transaction.

	<u>Cost of Items</u>	<u>Amount Paid</u>	<u>Change Required</u>
1.	€7.31	 €10.00	€2.69
2.	€3.24	 €10.00	€6.76
3.	€6.00	 €10.00	€4.00
4.	€1.63	 €10.00	€8.37
5.	€6.10	 €10.00	€3.90

Images from the European Central Bank and used under their reproduction rules.