

# Making Change (A)

Calculate how much change is required for each transaction.

Cost of Items

Amount Paid

Change Required

1. \$4.50



\$5.00

2. \$8.35



\$10.00

3. \$47.78



\$50.00

4. \$10.00



\$20.00

5. \$19.71








\$100.00

Images used with the permission of the Bank of Canada.

# Making Change (A) Answers

Calculate how much change is required for each transaction.

	<u>Cost of Items</u>	<u>Amount Paid</u>	<u>Change Required</u>
1.	\$4.50	 \$5.00	\$0.50
2.	\$8.35	 \$10.00	\$1.65
3.	\$47.78	 \$50.00	\$2.22
4.	\$10.00	 \$20.00	\$10.00
5.	\$19.71	 \$100.00	\$80.29

Images used with the permission of the Bank of Canada.

# Making Change (B)

Calculate how much change is required for each transaction.

Cost of Items

Amount Paid

Change Required

1. \$65.07



\$100.00

2. \$40.55



\$50.00

3. \$8.60



\$20.00

4. \$3.15



\$5.00

5. \$7.20








\$10.00

Images used with the permission of the Bank of Canada.

## Making Change (B) Answers

Calculate how much change is required for each transaction.

<u>Cost of Items</u>	<u>Amount Paid</u>	<u>Change Required</u>
1. \$65.07	 \$100.00	\$34.93
2. \$40.55	 \$50.00	\$9.45
3. \$8.60	 \$20.00	\$11.40
4. \$3.15	 \$5.00	\$1.85
5. \$7.20	 \$10.00	\$2.80

Images used with the permission of the Bank of Canada.

# Making Change (C)

Calculate how much change is required for each transaction.

Cost of Items

Amount Paid

Change Required

1. \$1.21



\$20.00

2. \$1.09



\$5.00

3. \$0.47



\$10.00

4. \$33.56



\$50.00

5. \$72.45



\$100.00

Images used with the permission of the Bank of Canada.

# Making Change (C) Answers

Calculate how much change is required for each transaction.

	<u>Cost of Items</u>	<u>Amount Paid</u>	<u>Change Required</u>
1.	\$1.21	 \$20.00	\$18.79
2.	\$1.09	 \$5.00	\$3.91
3.	\$0.47	 \$10.00	\$9.53
4.	\$33.56	 \$50.00	\$16.44
5.	\$72.45	 \$100.00	\$27.55

Images used with the permission of the Bank of Canada.

# Making Change (D)

Calculate how much change is required for each transaction.

Cost of Items

Amount Paid

Change Required

1. \$1.41



\$10.00

2. \$2.98



\$50.00

3. \$18.31



\$20.00

4. \$99.73



\$100.00

5. \$1.68







\$5.00

Images used with the permission of the Bank of Canada.

# Making Change (D) Answers

Calculate how much change is required for each transaction.

	<u>Cost of Items</u>	<u>Amount Paid</u>	<u>Change Required</u>
1.	\$1.41	 \$10.00	\$8.59
2.	\$2.98	 \$50.00	\$47.02
3.	\$18.31	 \$20.00	\$1.69
4.	\$99.73	 \$100.00	\$0.27
5.	\$1.68	 \$5.00	\$3.32

Images used with the permission of the Bank of Canada.



# Making Change (E)

Calculate how much change is required for each transaction.

Cost of Items

Amount Paid

Change Required

1. \$77.44



\$100.00

2. \$17.97



\$50.00

3. \$7.30



\$10.00

4. \$16.92



\$20.00

5. \$0.52







\$5.00

Images used with the permission of the Bank of Canada.

# Making Change (E) Answers

Calculate how much change is required for each transaction.

<u>Cost of Items</u>	<u>Amount Paid</u>	<u>Change Required</u>
1. \$77.44	 \$100.00	\$22.56
2. \$17.97	 \$50.00	\$32.03
3. \$7.30	 \$10.00	\$2.70
4. \$16.92	 \$20.00	\$3.08
5. \$0.52	 \$5.00	\$4.48

Images used with the permission of the Bank of Canada.

# Making Change (F)

Calculate how much change is required for each transaction.

Cost of Items

Amount Paid

Change Required

1. \$5.38



\$10.00

2. \$2.88



\$5.00

3. \$90.97



\$100.00

4. \$6.15



\$50.00

5. \$0.37



\$20.00

Images used with the permission of the Bank of Canada.

# Making Change (F) Answers

Calculate how much change is required for each transaction.

	<u>Cost of Items</u>	<u>Amount Paid</u>	<u>Change Required</u>
1.	\$5.38	 \$10.00	\$4.62
2.	\$2.88	 \$5.00	\$2.12
3.	\$90.97	 \$100.00	\$9.03
4.	\$6.15	 \$50.00	\$43.85
5.	\$0.37	 \$20.00	\$19.63

Images used with the permission of the Bank of Canada.

# Making Change (G)

Calculate how much change is required for each transaction.

Cost of Items

Amount Paid

Change Required

1. \$15.17



\$50.00

2. \$18.46



\$20.00

3. \$0.87



\$5.00

4. \$79.31



\$100.00

5. \$3.97



\$10.00

Images used with the permission of the Bank of Canada.

# Making Change (G) Answers

Calculate how much change is required for each transaction.

<u>Cost of Items</u>	<u>Amount Paid</u>	<u>Change Required</u>
1. \$15.17	 \$50.00	\$34.83
2. \$18.46	 \$20.00	\$1.54
3. \$0.87	 \$5.00	\$4.13
4. \$79.31	 \$100.00	\$20.69
5. \$3.97	 \$10.00	\$6.03

Images used with the permission of the Bank of Canada.

# Making Change (H)

Calculate how much change is required for each transaction.

Cost of Items

Amount Paid

Change Required

1. \$2.04



\$5.00

2. \$1.73




\$10.00

3. \$4.25



\$20.00

4. \$65.64



\$100.00

5. \$5.95








\$50.00

Images used with the permission of the Bank of Canada.

# Making Change (H) Answers

Calculate how much change is required for each transaction.

	<u>Cost of Items</u>	<u>Amount Paid</u>	<u>Change Required</u>
1.	\$2.04	 \$5.00	\$2.96
2.	\$1.73	 \$10.00	\$8.27
3.	\$4.25	 \$20.00	\$15.75
4.	\$65.64	 \$100.00	\$34.36
5.	\$5.95	 \$50.00	\$44.05

Images used with the permission of the Bank of Canada.



# Making Change (I)

Calculate how much change is required for each transaction.

Cost of Items

Amount Paid

Change Required

1. \$5.15



\$10.00

2. \$4.24



\$5.00

3. \$46.55



\$100.00

4. \$9.38



\$20.00

5. \$16.59



\$50.00

Images used with the permission of the Bank of Canada.

# Making Change (I) Answers

Calculate how much change is required for each transaction.

	<u>Cost of Items</u>	<u>Amount Paid</u>	<u>Change Required</u>
1.	\$5.15	 \$10.00	\$4.85
2.	\$4.24	 \$5.00	\$0.76
3.	\$46.55	 \$100.00	\$53.45
4.	\$9.38	 \$20.00	\$10.62
5.	\$16.59	 \$50.00	\$33.41

Images used with the permission of the Bank of Canada.

# Making Change (J)

Calculate how much change is required for each transaction.

Cost of Items

Amount Paid

Change Required

1. \$13.61



\$50.00

2. \$93.75



\$100.00

3. \$3.96



\$5.00

4. \$10.56



\$20.00

5. \$6.18








\$10.00

Images used with the permission of the Bank of Canada.

# Making Change (J) Answers

Calculate how much change is required for each transaction.

<u>Cost of Items</u>	<u>Amount Paid</u>	<u>Change Required</u>
1. \$13.61	 \$50.00	\$36.39
2. \$93.75	 \$100.00	\$6.25
3. \$3.96	 \$5.00	\$1.04
4. \$10.56	 \$20.00	\$9.44
5. \$6.18	 \$10.00	\$3.82

Images used with the permission of the Bank of Canada.