

Making Change from Canadian Bank Notes (J)

Name: _____

Date: _____

Score: _____

Calculate how much change is required for each transaction.

Cost of Items

Amount Paid

Change Required

1. \$4.75



\$20.00

2. \$14.51




\$20.00

3. \$3.50




\$5.00

4. \$1.39



\$10.00

5. \$3.25



\$10.00

Bank note images from Bank of Canada used according to terms.

Making Change from Canadian Bank Notes (J) Answers

Name: _____

Date: _____

Score: _____

Calculate how much change is required for each transaction.

Cost of Items

Amount Paid

Change Required

1. \$4.75



\$20.00

\$15.25

2. \$14.51



\$20.00

\$5.49

3. \$3.50



\$5.00

\$1.50


4. \$1.39



\$10.00

\$8.61

5. \$3.25



\$10.00

\$6.75

Bank note images from Bank of Canada used according to terms.