

Making Change from Canadian Bank Notes (H)

Name: _____

Date: _____

Score: _____

Calculate how much change is required for each transaction.

Cost of Items

Amount Paid

Change Required

1. \$3.72




\$5.00

2. \$10.39



\$20.00

3. \$3.48



\$10.00

4. \$5.24



\$10.00

5. \$7.75



\$20.00

Bank note images from Bank of Canada used according to terms.

Making Change from Canadian Bank Notes (H) Answers

Name: _____

Date: _____

Score: _____

Calculate how much change is required for each transaction.

Cost of Items

Amount Paid

Change Required

1. \$3.72



\$5.00

\$1.28


2. \$10.39



\$20.00

\$9.61


3. \$3.48



\$10.00

\$6.52

4. \$5.24



\$10.00

\$4.76

5. \$7.75



\$20.00

\$12.25

Bank note images from Bank of Canada used according to terms.