

Making Change from Canadian Bank Notes (F)

Name: _____

Date: _____

Score: _____


Calculate how much change is required for each transaction.

Cost of Items

Amount Paid

Change Required

1. \$9.47



\$10.00

2. \$3.35



\$5.00

3. \$1.48




\$20.00

4. \$0.26



\$20.00

5. \$2.18



\$10.00

Bank note images from Bank of Canada used according to terms.

Making Change from Canadian Bank Notes (F) Answers

Name: _____

Date: _____

Score: _____


Calculate how much change is required for each transaction.

Cost of Items

Amount Paid

Change Required

1. \$9.47



\$10.00

\$0.53

2. \$3.35



\$5.00

\$1.65

3. \$1.48



\$20.00

\$18.52

4. \$0.26



\$20.00

\$19.74

5. \$2.18



\$10.00

\$7.82

Bank note images from Bank of Canada used according to terms.