

# Making Change from Canadian Bank Notes (E)

Name: \_\_\_\_\_

Date: \_\_\_\_\_

Score: \_\_\_\_\_

Calculate how much change is required for each transaction.

Cost of Items

Amount Paid


Change Required

1. \$16.84



\$20.00

2. \$1.44



\$10.00

3. \$2.41




\$5.00

4. \$2.04



\$20.00

5. \$6.51



\$10.00

Bank note images from Bank of Canada used according to terms.

# Making Change from Canadian Bank Notes (E) Answers

Name: \_\_\_\_\_

Date: \_\_\_\_\_

Score: \_\_\_\_\_

Calculate how much change is required for each transaction.

Cost of Items

Amount Paid

Change Required


1. \$16.84



\$20.00

\$3.16

2. \$1.44



\$10.00

\$8.56

3. \$2.41



\$5.00

\$2.59

4. \$2.04



\$20.00

\$17.96

5. \$6.51



\$10.00

\$3.49

Bank note images from Bank of Canada used according to terms.