

# Making Change (D)

Calculate how much change is required for each transaction.

Cost of Items

Amount Paid

Change Required

1. \$1.09



\$100.00

2. \$1.46



\$100.00

3. \$20.25



\$100.00

4. \$95.38



\$100.00

5. \$29.38








\$100.00

Images used with the permission of the Bank of Canada.

# Making Change (D) Answers

Calculate how much change is required for each transaction.

	<u>Cost of Items</u>	<u>Amount Paid</u>	<u>Change Required</u>
1.	\$1.09	 \$100.00	\$98.91
2.	\$1.46	 \$100.00	\$98.54
3.	\$20.25	 \$100.00	\$79.75
4.	\$95.38	 \$100.00	\$4.62
5.	\$29.38	 \$100.00	\$70.62

Images used with the permission of the Bank of Canada.