

Making Change (A)

Calculate how much change is required for each transaction.

Cost of Items

Amount Paid

Change Required

1. \$15.65



\$50.00

2. \$23.46



\$50.00

3. \$10.68



\$50.00

4. \$33.12



\$50.00

5. \$20.10








\$50.00

Images used with the permission of the Bank of Canada.

Making Change (A) Answers

Calculate how much change is required for each transaction.

<u>Cost of Items</u>	<u>Amount Paid</u>	<u>Change Required</u>
1. \$15.65	 \$50.00	\$34.35
2. \$23.46	 \$50.00	\$26.54
3. \$10.68	 \$50.00	\$39.32
4. \$33.12	 \$50.00	\$16.88
5. \$20.10	 \$50.00	\$29.90

Images used with the permission of the Bank of Canada.

Making Change (B)

Calculate how much change is required for each transaction.

Cost of Items

Amount Paid

Change Required

1. \$2.05



\$50.00

2. \$27.93



\$50.00

3. \$20.52



\$50.00

4. \$32.69



\$50.00

5. \$25.36








\$50.00

Images used with the permission of the Bank of Canada.

Making Change (B) Answers

Calculate how much change is required for each transaction.

	<u>Cost of Items</u>	<u>Amount Paid</u>	<u>Change Required</u>
1.	\$2.05	 \$50.00	\$47.95
2.	\$27.93	 \$50.00	\$22.07
3.	\$20.52	 \$50.00	\$29.48
4.	\$32.69	 \$50.00	\$17.31
5.	\$25.36	 \$50.00	\$24.64

Images used with the permission of the Bank of Canada.

Making Change (C)

Calculate how much change is required for each transaction.

Cost of Items

Amount Paid

Change Required

1. \$49.88



\$50.00

2. \$19.70



\$50.00

3. \$22.60



\$50.00

4. \$18.03



\$50.00

5. \$27.15








\$50.00

Images used with the permission of the Bank of Canada.

Making Change (C) Answers

Calculate how much change is required for each transaction.

<u>Cost of Items</u>	<u>Amount Paid</u>	<u>Change Required</u>
1. \$49.88	 \$50.00	\$0.12
2. \$19.70	 \$50.00	\$30.30
3. \$22.60	 \$50.00	\$27.40
4. \$18.03	 \$50.00	\$31.97
5. \$27.15	 \$50.00	\$22.85

Images used with the permission of the Bank of Canada.

Making Change (D)

Calculate how much change is required for each transaction.

Cost of Items

Amount Paid

Change Required

1. \$9.42



\$50.00

2. \$17.37



\$50.00

3. \$19.49



\$50.00

4. \$1.12



\$50.00

5. \$49.46



\$50.00

Images used with the permission of the Bank of Canada.

Making Change (D) Answers

Calculate how much change is required for each transaction.

Cost of Items

Amount Paid

Change Required

1. \$9.42



\$50.00

\$40.58

2. \$17.37



\$50.00

\$32.63

3. \$19.49



\$50.00

\$30.51

4. \$1.12



\$50.00

\$48.88

5. \$49.46



\$50.00

\$0.54

Images used with the permission of the Bank of Canada.

Making Change (E)

Calculate how much change is required for each transaction.

Cost of Items

Amount Paid

Change Required

1. \$13.94



\$50.00

2. \$48.29



\$50.00

3. \$12.80



\$50.00

4. \$40.41



\$50.00

5. \$18.95








\$50.00

Images used with the permission of the Bank of Canada.

Making Change (E) Answers

Calculate how much change is required for each transaction.

<u>Cost of Items</u>	<u>Amount Paid</u>	<u>Change Required</u>
1. \$13.94	 \$50.00	\$36.06
2. \$48.29	 \$50.00	\$1.71
3. \$12.80	 \$50.00	\$37.20
4. \$40.41	 \$50.00	\$9.59
5. \$18.95	 \$50.00	\$31.05

Images used with the permission of the Bank of Canada.

Making Change (F)

Calculate how much change is required for each transaction.

Cost of Items

Amount Paid

Change Required

1. \$35.13



\$50.00

2. \$34.74



\$50.00

3. \$19.89



\$50.00

4. \$46.97



\$50.00

5. \$38.67








\$50.00

Images used with the permission of the Bank of Canada.

Making Change (F) Answers

Calculate how much change is required for each transaction.

<u>Cost of Items</u>	<u>Amount Paid</u>	<u>Change Required</u>
1. \$35.13	 \$50.00	\$14.87
2. \$34.74	 \$50.00	\$15.26
3. \$19.89	 \$50.00	\$30.11
4. \$46.97	 \$50.00	\$3.03
5. \$38.67	 \$50.00	\$11.33

Images used with the permission of the Bank of Canada.

Making Change (G)

Calculate how much change is required for each transaction.

Cost of Items

Amount Paid

Change Required

1. \$24.71



\$50.00

2. \$45.53



\$50.00

3. \$28.78



\$50.00

4. \$49.82



\$50.00

5. \$1.51








\$50.00

Images used with the permission of the Bank of Canada.

Making Change (G) Answers

Calculate how much change is required for each transaction.

<u>Cost of Items</u>	<u>Amount Paid</u>	<u>Change Required</u>
1. \$24.71	 \$50.00	\$25.29
2. \$45.53	 \$50.00	\$4.47
3. \$28.78	 \$50.00	\$21.22
4. \$49.82	 \$50.00	\$0.18
5. \$1.51	 \$50.00	\$48.49

Images used with the permission of the Bank of Canada.

Making Change (H)

Calculate how much change is required for each transaction.

Cost of Items

Amount Paid

Change Required

1. \$46.74



\$50.00

2. \$34.47



\$50.00

3. \$23.75



\$50.00

4. \$23.69



\$50.00

5. \$0.34








\$50.00

Images used with the permission of the Bank of Canada.

Making Change (H) Answers

Calculate how much change is required for each transaction.

<u>Cost of Items</u>	<u>Amount Paid</u>	<u>Change Required</u>
1. \$46.74	 \$50.00	\$3.26
2. \$34.47	 \$50.00	\$15.53
3. \$23.75	 \$50.00	\$26.25
4. \$23.69	 \$50.00	\$26.31
5. \$0.34	 \$50.00	\$49.66

Images used with the permission of the Bank of Canada.

Making Change (I)

Calculate how much change is required for each transaction.

Cost of Items

Amount Paid

Change Required

1. \$0.94



\$50.00

2. \$3.93



\$50.00

3. \$23.95



\$50.00

4. \$4.52



\$50.00

5. \$13.65








\$50.00

Images used with the permission of the Bank of Canada.

Making Change (I) Answers

Calculate how much change is required for each transaction.

	<u>Cost of Items</u>	<u>Amount Paid</u>	<u>Change Required</u>
1.	\$0.94	 \$50.00	\$49.06
2.	\$3.93	 \$50.00	\$46.07
3.	\$23.95	 \$50.00	\$26.05
4.	\$4.52	 \$50.00	\$45.48
5.	\$13.65	 \$50.00	\$36.35

Images used with the permission of the Bank of Canada.

Making Change (J)

Calculate how much change is required for each transaction.

Cost of Items

Amount Paid

Change Required

1. \$24.45



\$50.00

2. \$7.86



\$50.00

3. \$24.38



\$50.00

4. \$5.68



\$50.00

5. \$43.40








\$50.00

Images used with the permission of the Bank of Canada.

Making Change (J) Answers

Calculate how much change is required for each transaction.

<u>Cost of Items</u>	<u>Amount Paid</u>	<u>Change Required</u>
1. \$24.45	 \$50.00	\$25.55
2. \$7.86	 \$50.00	\$42.14
3. \$24.38	 \$50.00	\$25.62
4. \$5.68	 \$50.00	\$44.32
5. \$43.40	 \$50.00	\$6.60

Images used with the permission of the Bank of Canada.