

# Making Change (F)

Calculate how much change is required for each transaction.

Cost of Items

Amount Paid

Change Required

1. \$35.13



\$50.00

2. \$34.74



\$50.00

3. \$19.89



\$50.00

4. \$46.97



\$50.00

5. \$38.67








\$50.00

Images used with the permission of the Bank of Canada.

# Making Change (F) Answers

Calculate how much change is required for each transaction.

<u>Cost of Items</u>	<u>Amount Paid</u>	<u>Change Required</u>
1. \$35.13	 \$50.00	\$14.87
2. \$34.74	 \$50.00	\$15.26
3. \$19.89	 \$50.00	\$30.11
4. \$46.97	 \$50.00	\$3.03
5. \$38.67	 \$50.00	\$11.33

Images used with the permission of the Bank of Canada.