

# Making Change (D)

Calculate how much change is required for each transaction.

Cost of Items

Amount Paid

Change Required

1. \$9.42



\$50.00

2. \$17.37



\$50.00

3. \$19.49



\$50.00

4. \$1.12



\$50.00

5. \$49.46








\$50.00

Images used with the permission of the Bank of Canada.

# Making Change (D) Answers

Calculate how much change is required for each transaction.

	<u>Cost of Items</u>	<u>Amount Paid</u>	<u>Change Required</u>
1.	\$9.42	 \$50.00	\$40.58
2.	\$17.37	 \$50.00	\$32.63
3.	\$19.49	 \$50.00	\$30.51
4.	\$1.12	 \$50.00	\$48.88
5.	\$49.46	 \$50.00	\$0.54

Images used with the permission of the Bank of Canada.