

# Making Change (J)

Calculate how much change is required for each transaction.

Cost of Items

Amount Paid

Change Required

1. \$4.51



\$10.00

2. \$1.88



\$10.00

3. \$9.32



\$10.00

4. \$3.09



\$10.00

5. \$3.43








\$10.00

Images used with the permission of the Bank of Canada.

# Making Change (J) Answers

Calculate how much change is required for each transaction.

	<u>Cost of Items</u>	<u>Amount Paid</u>	<u>Change Required</u>
1.	\$4.51	 \$10.00	\$5.49
2.	\$1.88	 \$10.00	\$8.12
3.	\$9.32	 \$10.00	\$0.68
4.	\$3.09	 \$10.00	\$6.91
5.	\$3.43	 \$10.00	\$6.57

Images used with the permission of the Bank of Canada.