


# Counting U.S. Coins (I)


What is the value of each set of coins?

1.





\_\_\_\_\_

2.



\_\_\_\_\_

3.



\_\_\_\_\_