



Counting U.S. Coins (I)

What is the value of each set of coins?



1.



2.




3.



Counting U.S. Coins (I) Answers

What is the value of each set of coins?

1.





\$1.05

2.



\$1.26

3.



\$0.64