



Counting Coins (A)

What is the value of each group of coins?

1.



2.



Euro Coin images from the European Central Bank

Counting Coins (A) Answers

What is the value of each group of coins?

1.



3,81 €

2.



4,06 €

Euro Coin images from the European Central Bank

Counting Coins (B)

What is the value of each group of coins?

1.



_____ €

2.



_____ €

Euro Coin images from the European Central Bank

Counting Coins (B) Answers

What is the value of each group of coins?

1.



5,53 €

2.



1,35 €

Euro Coin images from the European Central Bank

Counting Coins (C)

What is the value of each group of coins?

1.



_____ €

2.



_____ €

Euro Coin images from the European Central Bank

Counting Coins (C) Answers

What is the value of each group of coins?

1.



1,87 €

2.



2,62 €

Euro Coin images from the European Central Bank


Counting Coins (D)

What is the value of each group of coins?

1.



2.



Euro Coin images from the European Central Bank

Counting Coins (D) Answers

What is the value of each group of coins?

1.



3,28 €

2.



3,21 €

Euro Coin images from the European Central Bank

Counting Coins (E)

What is the value of each group of coins?

1.



_____ €

2.



_____ €

Euro Coin images from the European Central Bank

Counting Coins (E) Answers

What is the value of each group of coins?

1.



5,28 €

2.




3,99 €

Euro Coin images from the European Central Bank

Counting Coins (F)

What is the value of each group of coins?

1.



2.



Euro Coin images from the European Central Bank

Counting Coins (F) Answers

What is the value of each group of coins?

1.



3,97 €

2.



5,60 €

Euro Coin images from the European Central Bank

Counting Coins (G)

What is the value of each group of coins?

1.



_____ €

2.



_____ €

Euro Coin images from the European Central Bank

Counting Coins (G) Answers

What is the value of each group of coins?

1.



4,86 €

2.



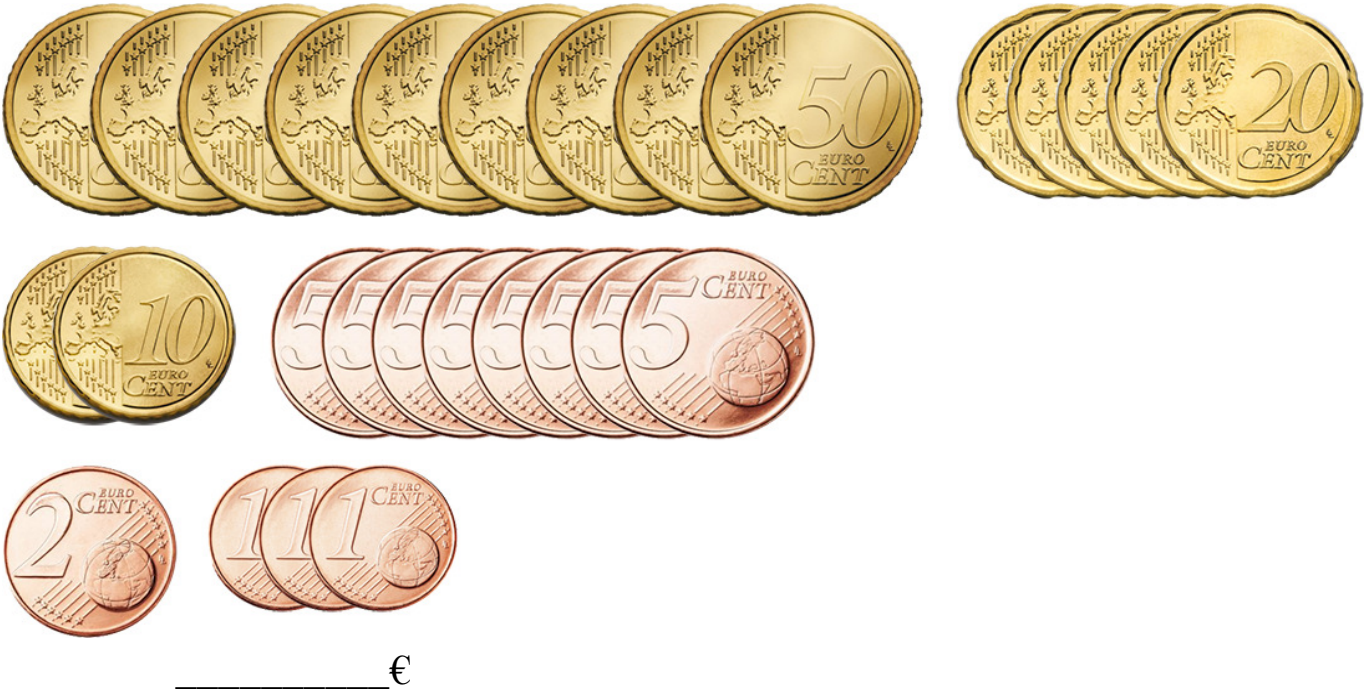
1,57 €

Euro Coin images from the European Central Bank

Counting Coins (H)

What is the value of each group of coins?

1.



2.



Euro Coin images from the European Central Bank

Counting Coins (H) Answers

What is the value of each group of coins?

1.



6,15 €

2.



3,47 €

Euro Coin images from the European Central Bank

Counting Coins (I)

What is the value of each group of coins?

1.



_____ €

2.



_____ €

Euro Coin images from the European Central Bank

Counting Coins (I) Answers

What is the value of each group of coins?

1.



7,07 €

2.




4,44 €

Euro Coin images from the European Central Bank


Counting Coins (J)

What is the value of each group of coins?

1.



2.



Euro Coin images from the European Central Bank

Counting Coins (J) Answers

What is the value of each group of coins?

1.



4,77 €

2.



5,39 €

Euro Coin images from the European Central Bank