


Counting British Coins (H)

What is the value of each set of coins?

1.




2.



Counting British Coins (H) Answers


What is the value of each set of coins?

1.



£7.08

2.



£8.27