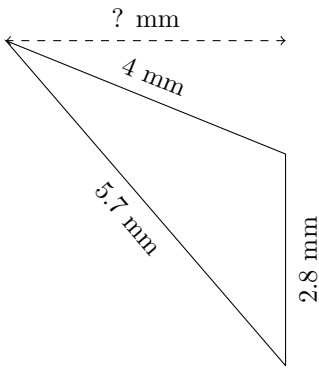


Triangles Measurements (E)

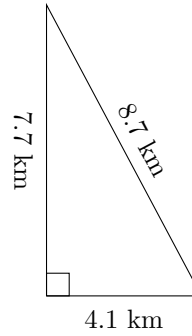
Calculate the area of each triangle using Heron's formula.

1.



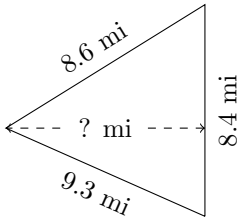
$P = ? \text{ mm}$
 $A = ? \text{ mm}^2$

2.



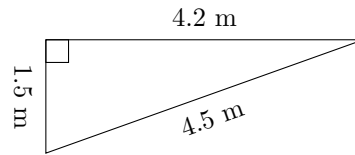
$P = ? \text{ km}$
 $A = ? \text{ km}^2$

3.



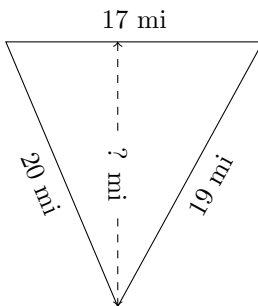
$P = ? \text{ mi}$
 $A = ? \text{ mi}^2$

4.



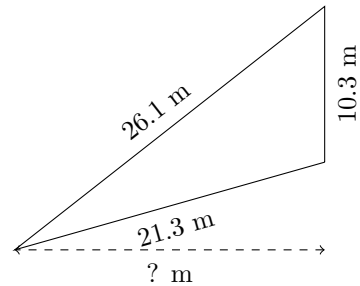
$P = ? \text{ m}$
 $A = ? \text{ m}^2$

5.



$P = ? \text{ mi}$
 $A = ? \text{ mi}^2$

6.



$P = ? \text{ m}$
 $A = ? \text{ m}^2$