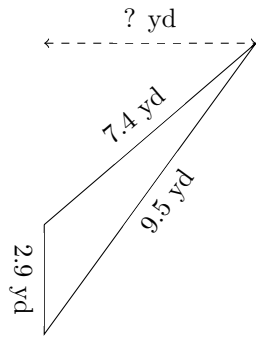


# Triangles Measurements (F)

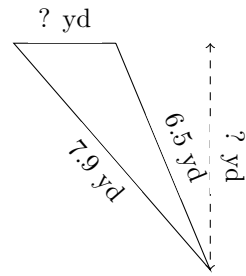
Calculate the missing measurements for each triangle.

1.



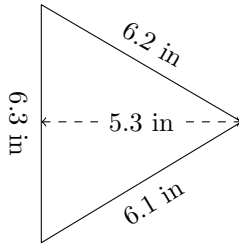
$P = ? \text{ yd}$   
 $A = 8.12 \text{ yd}^2$

2.



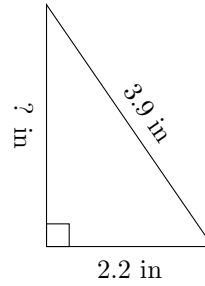
$P = 17.1 \text{ yd}$   
 $A = 8.1 \text{ yd}^2$

3.



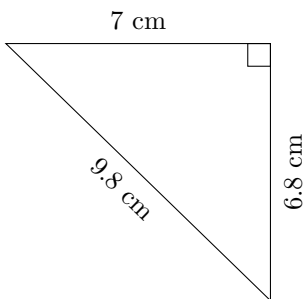
$P = ? \text{ in}$   
 $A = ? \text{ in}^2$

4.



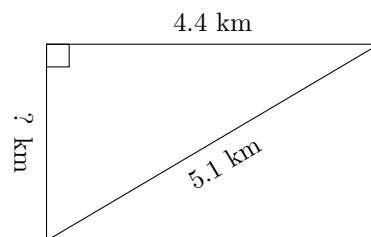
$P = 9.3 \text{ in}$   
 $A = ? \text{ in}^2$

5.



$P = ? \text{ cm}$   
 $A = ? \text{ cm}^2$

6.



$P = 12.1 \text{ km}$   
 $A = ? \text{ km}^2$