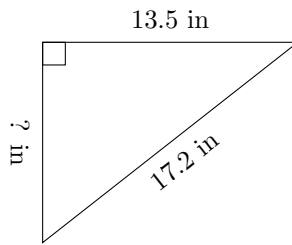


Triangles Measurements (B)

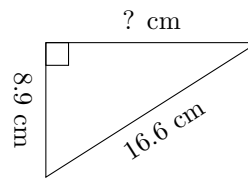
Calculate the missing measurements for each triangle.

1.



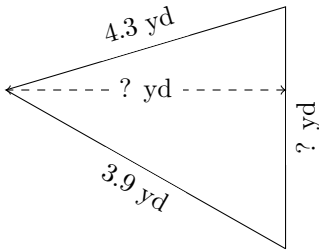
$P = 41.3 \text{ in}$
 $A = ? \text{ in}^2$

2.



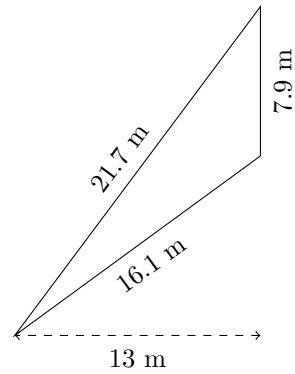
$P = 39.5 \text{ cm}$
 $A = ? \text{ cm}^2$

3.



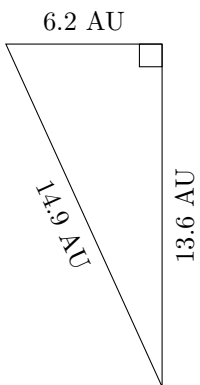
$P = 11.4 \text{ yd}$
 $A = 5.92 \text{ yd}^2$

4.



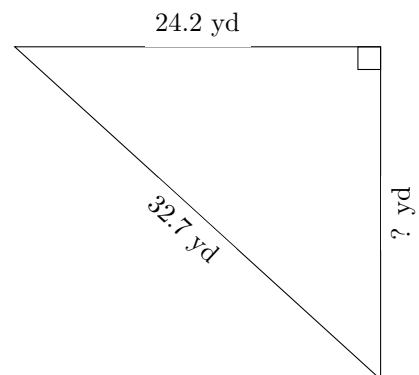
$P = ? \text{ m}$
 $A = ? \text{ m}^2$

5.



$P = ? \text{ AU}$
 $A = ? \text{ AU}^2$

6.



$P = ? \text{ yd}$
 $A = 266.2 \text{ yd}^2$