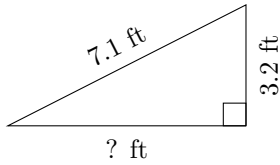


Triangles Measurements (A)

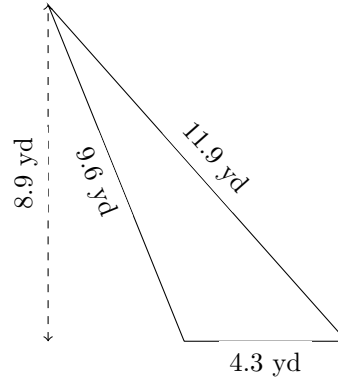
Calculate the missing measurements for each triangle.

1.



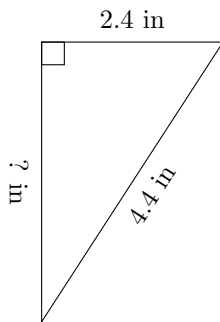
$P = ? \text{ ft}$
 $A = 10.08 \text{ ft}^2$

2.



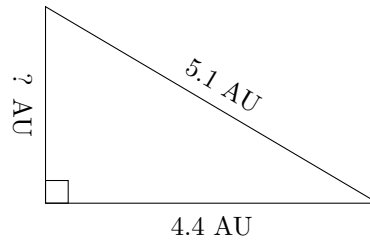
$P = ? \text{ yd}$
 $A = ? \text{ yd}^2$

3.



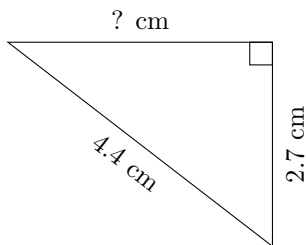
$P = 10.5 \text{ in}$
 $A = ? \text{ in}^2$

4.



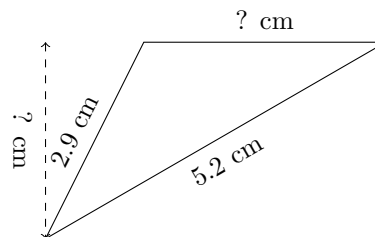
$P = 12.1 \text{ AU}$
 $A = ? \text{ AU}^2$

5.



$P = 10.6 \text{ cm}$
 $A = ? \text{ cm}^2$

6.



$P = 11.3 \text{ cm}$
 $A = 4.16 \text{ cm}^2$