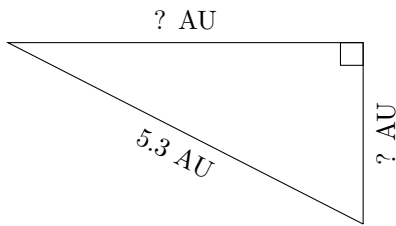


# Triangles Measurements (F)

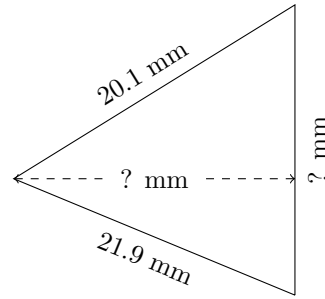
Calculate the missing measurements for each triangle.

1.



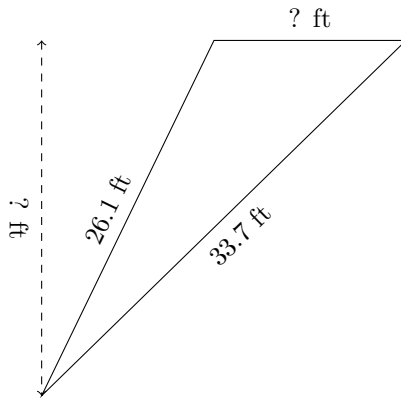
$P = 12.4 \text{ AU}$   
 $A = 5.64 \text{ AU}^2$

2.



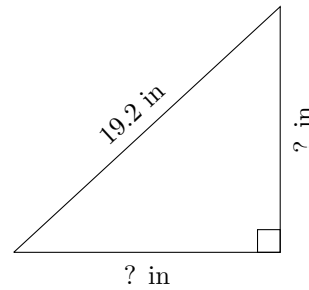
$P = 61.2 \text{ mm}$   
 $A = 178.56 \text{ mm}^2$

3.



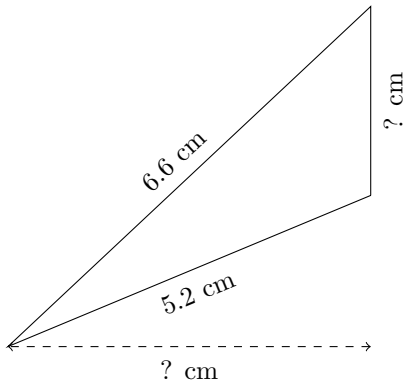
$P = 72.5 \text{ ft}$   
 $A = 149.225 \text{ ft}^2$

4.



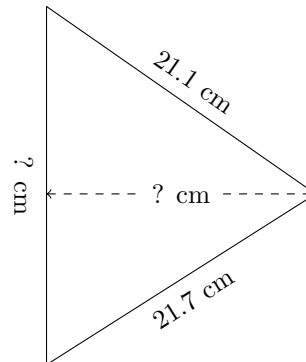
$P = 46.3 \text{ in}$   
 $A = 91.65 \text{ in}^2$

5.



$P = 14.3 \text{ cm}$   
 $A = 6 \text{ cm}^2$

6.



$P = 66.5 \text{ cm}$   
 $A = 210.93 \text{ cm}^2$